

INTELLIGENCE BUREAU

(Ministry of Home Affairs)

Government of India

| | |
|------------------|--|
| Participant ID | |
| Applica on no | |
| Participant Name | |
| Test Center Name | iON Digital Zone iDZ Ram Ganga Vihar Phase 2 |
| Test Date | 18/01/2024 |
| Test Time | 11:30 AM - 12:30 PM |
| Subject | IB ACIO II Exe |

Section : Current Affairs

Q.1 Which of the following statement is INCORRECT about inauguration of Assisted Reproductive Technology (ART) in Goa in 2023?

1. Chief Minister Dr. Pramod Sawant inaugurated the Assisted Reproductive Technology (ART) and Intrauterine Insemination (IUI)/In Vitro Fertilization (IVF) Centre on August 14, 2023.
2. Goa Medical College became the second government hospital in the country to provide such comprehensive IVF services.
3. The event held at Taj Convention Centre, Dona-Paula.
4. IVF services are paid one commencing from 1st September at the Goa Medical College & Hospital (GMC)

Ans

- 1.1 and 3 only
- 2.4 and 2 only
- 3.3 and 4 only
- 4.1 and 2 only

Question ID : 630680558070

Option 1 ID : 6306802181254

Option 2 ID : 6306802181253

Option 3 ID : 6306802181252

Option 4 ID : 6306802181251

Status : Not Answered

Chosen Option : --

Q.2 Which of the following statement is correct about ICC ODI World Cup 2023?

I. In the high stake final played at the Narendra Modi Stadium, Australia ended India's unbeaten streak in the tournament and scored a 6-wicket victory to lift the title.

II. Indian star batter Virat Kohli has been awarded with the "player of the tournament" title in the ICC World Cup 2023 for his exemplary performance.

Ans

✓ 1. Both I and II

✗ 2. Only II

✗ 3. Only I

✗ 4. Neither I nor II

Question ID : 630680556616
Option 1 ID : 6306802175456
Option 2 ID : 6306802175455
Option 3 ID : 6306802175454
Option 4 ID : 6306802175457
Status : Answered
Chosen Option : 1

Q.3 India along with _____ ASEAN Member States (AMS) were represented by 200 participants, at the 4th edition of the annual ASEAN India Grassroots Innovation Forum (AIGIF) that was launched in Langkawi, Malaysia on 28th November 2023.

Ans

✓ 1. 10

✗ 2. 8

✗ 3. 6

✗ 4. 4

Question ID : 630680556598
Option 1 ID : 6306802175383
Option 2 ID : 6306802175385
Option 3 ID : 6306802175384
Option 4 ID : 6306802175382
Status : Answered
Chosen Option : 2

Q.4 Which of the following statement is/are INCORRECT about Chandrayaan-3?

1. With the successful landing of the Lander Module of ISRO's third lunar mission Chandrayaan-3, India has reached the Moon! It has also become the first country to land near the Moon's south pole.

2. The Lander Module (LM) of the Indian Space Research Organisation's (ISRO) third lunar mission Chandrayaan-3, launched on July 14, made a successfully landing on the Moon's surface on August 23, making India only the fourth country after the erstwhile USSR, the U.S. and China.

Ans

✓ 1. Neither 1 nor 2

✗ 2. Both 1 & 2

✗ 3. 2 only

✗ 4. 1 only

Question ID : 630680558039
Option 1 ID : 6306802181130
Option 2 ID : 6306802181129
Option 3 ID : 6306802181128
Option 4 ID : 6306802181127
Status : Marked For Review
Chosen Option : 2

Q.5 President Droupadi Murmu has given her assent to the Central Goods and Services Tax (Amendment) Bill, 2023. This bill is made to define which of the following?

I. Defines the expressions online gaming, online money gaming.

II. Virtual digital assets .

- Ans
- 1. Only II
 - 2. Neither I nor II
 - 3. Only I
 - 4. Both I and II

Question ID : 630680556656
Option 1 ID : 6306802175615
Option 2 ID : 6306802175617
Option 3 ID : 6306802175614
Option 4 ID : 6306802175616
Status : Not Attempted and Marked For Review
Chosen Option : --

Q.6 As per fifth World Air Quality Report prepared by IQ Air based on the annual average level of pollutant PM_{2.5} in air in 2023, which of the following statement is correct?

I. A total of 39 Indian cities featured on the list of world's 50 most polluted cities.

II. The national capital 'New Delhi' is in top 10 polluted city.

- Ans
- 1. Neither I nor II
 - 2. Both I and II
 - 3. Only II
 - 4. Only I

Question ID : 630680556668
Option 1 ID : 6306802175665
Option 2 ID : 6306802175664
Option 3 ID : 6306802175663
Option 4 ID : 6306802175662
Status : Not Answered
Chosen Option : --

Q.7 Which of the following statement is/are INCORRECT about the new variety "Lotus" flower developed by Lucknow Institute CSIR-NBRI (National Botanical Research Institute)?

1. This new variant is called the "Namoh 118" lotus variant.
2. It carries spiritual significance owing to its 118 petals, symbolizing deep devotion.
3. This is the first lotus variety whose genome is completely sequenced for its characteristics.
4. It was unveiled by Union Minister Dr. Jitendra Singh on 19th August 2023.

- Ans
- 1. 3 and 4 only
 - 2. 2 and 3 only
 - 3. 1 and 2 only
 - 4. 1 and 4 only

Question ID : 630680558045
Option 1 ID : 6306802181152
Option 2 ID : 6306802181153
Option 3 ID : 6306802181151
Option 4 ID : 6306802181154
Status : Not Answered
Chosen Option : --

Q.8 In October 2023, the Arunachal Pradesh Cabinet, approved 3 important byelaws for the proper management of solid waste in the state. Which of the following Byelaws are among those 3 approved byelaws?

1. Arunachal Pradesh Solid Waste (Management & Handling) Byelaws 2023
2. Plastic Waste Management Byelaws 2023
3. Construction & Demolition Waste Management Byelaws 2023
4. Operation and Maintenance of Bio-degradable wastages Byelaws 2023

Ans

- 1. 2, 3 and 4 only
- 2. 1, 2 and 3 only
- 3. 1, 3 and 4 only
- 4. 1, 2 and 4 only

Question ID : 630680558077
Option 1 ID : 6306802181281
Option 2 ID : 6306802181279
Option 3 ID : 6306802181282
Option 4 ID : 6306802181280
Status : Not Answered
Chosen Option : --

Q.9 The government of India has decided to rename the Ayushman Bharat-Health and Wellness Centers as _____ and the Union Health Ministry has sent a letter to the states and Union territories to implement the rebranding exercise by end of 2023.

Ans

- 1. Ayushman Arogya Mandir
- 2. Ayushman Arogya Sansthan
- 3. Ayushman Arogya Kendra
- 4. Ayushman Arogya Bhawan

Question ID : 630680556650
Option 1 ID : 6306802175590
Option 2 ID : 6306802175593
Option 3 ID : 6306802175592
Option 4 ID : 6306802175591
Status : Answered
Chosen Option : 3

Q.10 Which statement of the following is/are INCORRECT about the 2023 Plastic Overshoot report by Swiss-based research consultancy Earth Action (EA)?

1. Overshoot Day for India, or the date when the amount of plastic waste outweighed the country's ability to manage it, was January 6 2023.
2. India is among the 10 countries which are responsible for 52 per cent of the world's mismanaged plastic waste as per EA's report.
3. India ranks 9th in the Mismanaged Waste Index (MWI), with 98.55 per cent of generated waste being mismanaged.

Ans

- 1. 2 only
- 2. 1 and 3 only
- 3. 3 only
- 4. 2 and 3 only

Question ID : 630680558086
Option 1 ID : 6306802181315
Option 2 ID : 6306802181318
Option 3 ID : 6306802181316
Option 4 ID : 6306802181317
Status : Not Answered
Chosen Option : --

Q.11 Which of the following statement is correct about Surajkund Mela 2023?

I. It is organized every year in Faridabad, Haryana and is held during the first half of the month of February.

II. This is one of the most celebrated international Craftsmela and is organized by the Haryana Tourism Department.

Ans

- 1. Neither I nor
- II 2. Only II
- 3. Only I
- 4. Both I and II

Question ID : 630680556692
Option 1 ID : 6306802175761
Option 2 ID : 6306802175759
Option 3 ID : 6306802175758
Option 4 ID : 6306802175760
Status : Not Answered
Chosen Option : --

Q.12 Prime Minister Narendra Modi inaugurated 'Semicon India 2023', a premier for the showcase of which of the following on July 28 2023?

Ans

- 1. IT power
- 2. Sustainable solar power production
- 3. Semiconductor capabilities and chip design
- 4. Advancement in Communication sector

Question ID : 630680556627
Option 1 ID : 6306802175499
Option 2 ID : 6306802175501
Option 3 ID : 6306802175500
Option 4 ID : 6306802175498
Status : Answered
Chosen Option : 3

Q.13 What is total fertility rate (children per woman) of India as per national family health survey 2019-21?

Ans

- 1. 2.4
- 2. 2.0
- 3. 2.6
- 4. 2.2

Question ID : 630680556641
Option 1 ID : 6306802175556
Option 2 ID : 6306802175554
Option 3 ID : 6306802175557
Option 4 ID : 6306802175555
Status : Not Answered
Chosen Option : --

Q.14 Which of the following is/are the CORRECT statements about Director General of the Indian Coast Guard ?

1. DG Rakesh Pal has been appointed as the 25th Director General of the Indian Coast Guard (ICG) in July 2023.
2. He has undergone professional specialization in Gunnery & Weapons System at Indian Naval School Dronacharya, Kochi.
3. He is an alumnus of the Indian Naval Academy and joined Indian Coast Guard in January 1989.
4. He holds the recognition of being the First Gunner of ICG.

Ans

- 1. 3 and 1 only
- 2. 2,3 and 4 only
- 3. 1,2,3 and 4
- 4. 2 and 4 only

Question ID : 630680558056
Option 1 ID : 6306802181196
Option 2 ID : 6306802181198
Option 3 ID : 6306802181197
Option 4 ID : 6306802181195
Status : Not Answered
Chosen Option : --

Q.15 Which of the following is/ are CORRECT about Global Conference on Digital Health held in March 2023?

1. Dr Mansukh Mandaviya addressed Global Conference on Digital Health themed 'Taking Universal Health Coverage to the last Citizen'.
2. This conference was a co-branded event under India's G20 Presidency organised by WHO – South-East Asia Region in collaboration with Ministry of Health & Family Welfare, Government of India.

Ans

- 1. Neither 1 nor 2
- 2. 2 only
- 3. 1 and 2
- 4. 1 only

Question ID : 630680558060
Option 1 ID : 6306802181214
Option 2 ID : 6306802181212
Option 3 ID : 6306802181211
Option 4 ID : 6306802181213
Status : Not Answered
Chosen Option : --

Q.16 Find the INCORRECT statement(s) about Exercise BRIGHT STAR-23?

1. The Indian Air Force contingent consisted of five MiG-29, two IL-78, two C-130 and two C-17 aircraft.
2. Personnel from the IAF's Garud Special Forces, as well as those from the Numbers 28, 77, 78 and 81 Squadrons participated in the exercise.
3. The IAF transport aircraft provided airlift to approximately 500 personnel from the Indian Army.

Ans

- 1. 3 only
- 2. 1,2 and 3
- 3. 1 only
- 4. 1 and 3 only

Question ID : 630680558051
Option 1 ID : 6306802181176
Option 2 ID : 6306802181177
Option 3 ID : 6306802181175
Option 4 ID : 6306802181178
Status : Not Answered
Chosen Option : --

Q.17 Which of the following statement is / are correct regarding Squash World Cup 2023?

1. India's campaign at the Squash World Cup 2023 ended in the semi-finals after losing to Colombia 4-2 on 16th June 2023 at the Express Avenue Mall in Chennai.
2. It was the fourth edition of the team championship which made a return to the international squash calendar after 12 years.
3. Eight teams - hosts India, Australia, Colombia, Egypt, Hong Kong China, Japan, Malaysia and South Africa - competed for the title at Chennai.

Ans 1. 1 &2 only

2. 1, 2 & 3

3. 1, nor 2 nor 3

4. 2 &3 only

Question ID : 630680558035
Option 1 ID : 630680218111
Option 2 ID : 1
Option 3 ID : 630680218111
Option 4 ID : 3
Status : 630680218111
Chosen Option : 4
630680218111

2 Not

Answered --

Q.18 In 2023, Prime Minister Narendra Modi, on the occasion of which of the following day paid tributes to Chhatrapati Shivaji Maharaj, and unveiled a grand statue of the 17th century Maratha king at the coastal fort of Sindhugarh, Maharashtra?

Ans 1. Independence day

2. Nonviolence day

3. Republic day

4. Navy day

Question ID : 630680556675
Option 1 ID : 6306802175692
Option 2 ID : 6306802175693
Option 3 ID : 6306802175691
Option 4 ID : 6306802175690
Status : Not Answered
Chosen Option : --

Q.19 Which of the following Statements is/are CORRECT about Aravalli Green Wall Project?

1. Union Minister Shri Bhupender Yadav on 25th March 2023 launched the Aravalli Green Wall Project, a major initiative to green the 5 km buffer area around the Aravalli Hill Range in four states.

2. The project covers states of Haryana, Rajasthan, Gujarat and Punjab - where the Aravalli hills landscape span over 6 million hectares of land.

3. The project will cover degraded land in Gurgaon, Faridabad, Bhiwani, Mahendergarh and in Rewari districts of Haryana.

Ans 1. 3 and 1 only

2. 1,2 and 3

3. 1 and 2 only

4. 2 and 3 only

Question ID : 630680558082
Option 1 ID : 6306802181300
Option 2 ID : 6306802181301
Option 3 ID : 6306802181299
Option 4 ID : 6306802181302
Status : Not Answered
Chosen Option : --

Q.20 Which of the following statement is correct about New Global Financing Pact 2023?

I. The summit was co-organized by France, Barbados and India.

II. The objective of the summit is to set the foundations for a new global financing architecture beyond the Bretton Woods system to address climate change, biodiversity crisis and development challenges.

- Ans
- 1. Only II
 - 2. Neither I nor II
 - 3. Only I
 - 4. Both I and II

Question ID : 630680556606
Option 1 ID : 6306802175415
Option 2 ID : 6306802175417
Option 3 ID : 6306802175414
Option 4 ID : 6306802175416
Status : Not Answered
Chosen Option : --

Section : General Studies

Q.1 Which of the following is an example of colonial architectures in India?

I. Gateway of India, Mumbai

II. India Gate, New Delhi

- Ans
- 1. Only I
 - 2. Both I and II
 - 3. Only II
 - 4. Neither I nor II

Question ID : 630680557486
Option 1 ID : 6306802179003
Option 2 ID : 6306802179005
Option 3 ID : 6306802179004
Option 4 ID : 6306802179006
Status : Answered
Chosen Option : 1

Q.2 In the east and central India, the Mauryas were succeeded by whom?

I. The Sungas

II. The Kanvas

- Ans
- 1. Only I
 - 2. Only II
 - 3. Both I and II
 - 4. Neither I nor II

Question ID : 630680557472
Option 1 ID : 6306802178947
Option 2 ID : 6306802178948
Option 3 ID : 6306802178949
Option 4 ID : 6306802178950
Status : Answered
Chosen Option : 3

Q.3 The executive power of state shall be vested in whom as per Indian constitution?

- Ans
- 1. Chief Minister
 - 2. Governor
 - 3. President
 - 4. State Council of Ministers

Question ID : 630680557547
Option 1 ID : 6306802179247
Option 2 ID : 6306802179248
Option 3 ID : 6306802179249
Option 4 ID : 6306802179250
Status : Answered
Chosen Option : 2

Q.4 Which of the following is correct statement about Industrial Policy Resolution 1956?

I. This resolution formed the basis of the Second Five Year Plan, the plan which tried to build the basis for a socialist pattern of society.

II. This resolution classified industries into two categories only. The first category comprised industries which would be exclusively owned by the private sector.

- Ans
- 1. Neither I nor II
 - 2. Only II
 - 3. Both I and II
 - 4. Only I

Question ID : 630680557529
Option 1 ID : 6306802179178
Option 2 ID : 6306802179176
Option 3 ID : 6306802179177
Option 4 ID : 6306802179175
Status : Not Answered
Chosen Option : --

Q.5 What is the meaning of Zakat in Islam?

- Ans
- 1. Fasting
 - 2. Prayer
 - 3. Almsgiving
 - 4. Pilgrimage

Question ID : 630680557479
Option 1 ID : 6306802178975
Option 2 ID : 6306802178976
Option 3 ID : 6306802178977
Option 4 ID : 6306802178978
Status : Answered
Chosen Option : 4

Q.6 Typically, _____ are papers bearing the promise of a future stream of monetary returns over a certain period of time.

- Ans
- 1. deposits
 - 2. securities
 - 3. bonds
 - 4. capitals

Question ID : 630680557518
Option 1 ID : 6306802179134
Option 2 ID : 6306802179133
Option 3 ID : 6306802179132
Option 4 ID : 6306802179131
Status : Answered
Chosen Option : 1

Q.7 Consider the following statements regarding the Commission and Committee of Parliament on the official languages.

- 1) It shall be the duty of the Commission to make recommendations to the President as to the progressive use of the Hindi language for the official purposes of the Union.
- 2) There shall be constituted a Committee consisting of 30 members.
- 3) Out of 30 Members of the Committee, 10 shall be members of the House of the People and 20 shall be members of the Council of States.

Which of the given statements is/are correct?

- Ans
- 1. 2 and 3 only
 - 2. 1, 2 and 3
 - 3. 1 and 3 only
 - 4. 1 and 2 only

Question ID : 630680557402
Option 1 ID : 6306802178664
Option 2 ID : 6306802178666
Option 3 ID : 6306802178665
Option 4 ID : 6306802178663
Status : Not Answered
Chosen Option : --

Q.8 Generally tribes are found in all parts of India but which of the following area is NOT associated with major tribal population of India?

- Ans
- 1. Delhi
 - 2. Jharkhand
 - 3. Lakshadweep islands
 - 4. Andaman & Nicobar islands

Question ID : 630680557512
Option 1 ID : 6306802179110
Option 2 ID : 6306802179107
Option 3 ID : 6306802179108
Option 4 ID : 6306802179109
Status : Answered
Chosen Option : 1

- Q.9 Consider the eligibility criteria to avail connection under Ujjwala 2.0.
1. Applicant (woman only) must have attained 18 years of age.
 2. There should not be any other LPG connection from any OMC in the same household.
 3. Adult woman belonging to any of the following categories – SC, ST, Pradhan Mantri Awas Yojana (Gramin), Most Backward Classes (MBC), Antyodaya Anna Yojana (AAY), Tea and Ex-Tea Garden tribes, Forest Dwellers, People residing in Islands and River Islands, enlisted under SECC Households (AHL TIN) or any Poor Household as per 14-point declaration.
 4. All adult members of the household must have an Aadhar Card and a bank account.
- Which of the above are correct?

- Ans
- 1. Only 1, 2 and 3
 - 2. Only 1 and 2
 - 3. Only 1, 2 and 4
 - 4. Only 1, 3 and 4

Question ID : 630680557432
Option 1 ID : 6306802178784
Option 2 ID : 6306802178785
Option 3 ID : 6306802178783
Option 4 ID : 6306802178786
Status : Answered
Chosen Option : 1

- Q.10 Consider the following pairs and identify which of the following pairs of religious texts and associated religions are matched correctly.
1. Aranyakas – Hinduism
 2. Janamsakhis – Sikhism
 3. Agam Sutras – Buddhism
 4. Tripitaka – Jainism

- Ans
- 1. 1, 3 and 4 only
 - 2. 2, 3 and 4 only
 - 3. 1 and 2 only
 - 4. 2 and 3 only

Question ID : 630680557407
Option 1 ID : 6306802178684
Option 2 ID : 6306802178686
Option 3 ID : 6306802178685
Option 4 ID : 6306802178683
Status : Answered
Chosen Option : 3

- Q.11 In 1526 who defeated the Sultan of Delhi, Ibrahim Lodi, at Panipat and captured Delhi and Agra?

- 1
- Ans
- 1. Humayun
 - 2. Akbar
 - 3. Maharana Pratap
 - 4. Babur

Question ID : 630680557460
Option 1 ID : 6306802178900
Option 2 ID : 6306802178901
Option 3 ID : 6306802178902
Option 4 ID : 6306802178899
Status : Answered
Chosen Option : 4

Q.12 Arrange the following monuments in the chronological order of their construction.

1. Humayun's Tomb, New Delhi
2. Tomb of I'timād-ud-Daulah, Agra
3. Salim Chishti's Tomb, Fatehpur Sikri
4. Rabia Daurani's Tomb, Aurangabad

- Ans
- 1. 1, 2, 3, 4
 - 2. 1, 3, 2, 4
 - 3. 4, 1, 2, 3
 - 4. 2, 1, 3, 4

Question ID : 630680557396
Option 1 ID : 6306802178639
Option 2 ID : 6306802178640
Option 3 ID : 6306802178642
Option 4 ID : 6306802178641
Status : Marked For Review
Chosen Option : 2

Q.13 Which of the following statement is correct about second five year plan of India?

- I. The draft of this Plan was prepared by P. C. Mahalanobis only.
- II. This plan emphasised on industrialisation of the economy, particularly heavy industries.

- Ans
- 1. Both I and II
 - 2. Only I
 - 3. Only II
 - 4. Neither I nor II

Question ID : 630680557524
Option 1 ID : 6306802179157
Option 2 ID : 6306802179155
Option 3 ID : 6306802179156
Option 4 ID : 6306802179158
Status : Answered
Chosen Option : 2

Q.14 Which of the following statement is correct about human made resources?

- I. People use natural resources to make buildings, bridges, roads, machinery and vehicles, which are known as human made resources.
- II. Technology is not a human made resource.

- Ans
- 1. Only II
 - 2. Only I
 - 3. Both I and II
 - 4. Neither I nor II

Question ID : 630680557498
Option 1 ID : 6306802179052
Option 2 ID : 6306802179051
Option 3 ID : 6306802179053
Option 4 ID : 6306802179054
Status : Answered
Chosen Option : 4

Q.15 Which of the following statements about Lok Sabha are correct?

1. The Lok Sabha (House of the People) was duly constituted for the first time on 17 April 1952.
2. As many as seventeen General Elections to the Lok Sabha have been held as of December 2023.
3. Sarvepalli Radhakrishnan was the first Speaker of Lok Sabha.
4. Shri. Ganesh Vasudev Mavalankar was the first Deputy Speaker of Lok Sabha.

- Ans
- 1. Only 3 and 4
 - 2. Only 1 and 2
 - 3. Only 1 and 4
 - 4. Only 2 and 3

Question ID : 630680557439
Option 1 ID : 6306802178813
Option 2 ID : 6306802178811
Option 3 ID : 6306802178814
Option 4 ID : 6306802178812
Status : Not Answered
Chosen Option : --

Q.16 The Gandhi Irwin Pact included which of the following?

1. The Pact proposed another round table conference to discuss the agreements reached in the first.
2. The Indian National Congress was to withdraw the Civil Disobedience Movement immediately and effectively in all respects.
3. The boycott of British goods would also be withdrawn forthwith. The Government will not condone breach of the existing law relating to salt administration and would the Salt Act be amended
4. The Government will not condone breach of the existing law relating to salt administration and would the Salt Act be amended.

- Ans
- 1. 1, 2 and 3 only
 - 2. 2, 3 and 4 only
 - 3. 1 only
 - 4. 3 and 4 only

Question ID : 630680557391
Option 1 ID : 6306802178620
Option 2 ID : 6306802178622
Option 3 ID : 6306802178619
Option 4 ID : 6306802178621
Status : Answered
Chosen Option : 1

Q.1 Who is the formal head of the state of India?

- 7
- 1. President
- Ans
- 2. Finance Minister
 - 3. Prime Minister
 - 4. Home Minister

Question ID : 630680557545
Option 1 ID : 6306802179239
Option 2 ID : 6306802179242
Option 3 ID : 6306802179240
Option 4 ID : 6306802179241
Status : Answered
Chosen Option : 1

Q.18 Which of the following statements about the Godavari river are correct?

1. The river rises in the Sahyadris, near Trimbakeshwar in the Nashik district of Maharashtra.
2. At Dowlaiswaram, the river divides into two branches, the Gautami and Vasishtha.
3. The Gautami branch joins the Bay of Bengal flowing through the Yanam enclave of Union Territory of Puducherry.
4. On the north, it is bound by the Balaghat and the Mahadeo ranges stretching forth from the eastern flank of the Western Ghats.

- Ans
- 1. Only 3 and 4
 - 2. Only 1, 2 and 3
 - 3. Only 1 and 2
 - 4. Only 1, 3 and 4

Question ID : 630680557413
Option 1 ID : 6306802178710
Option 2 ID : 6306802178708
Option 3 ID : 6306802178707
Option 4 ID : 6306802178709
Status : Not Answered
Chosen Option : --

Q.19 The Ministry of Road Transport and Highways (MoRTH) has issued a draft notification dated 14 June 2023 proposing Motor Third Party Premium and Liability Rules for the Financial Year (FY) 2023-24, in consultation with Insurance Regulatory and Development Authority of India (IRDAI). With respect to the above draft, which of the following statements are correct?

- Statement 1: A discount of 15% in premium has been proposed for educational institution buses.
- Statement 2: A discount of 25% in premium has been proposed for a private car registered as a Vintage Car.
- Statement 3: A discount of 15% and 7.5% in premium has been proposed for electric vehicles and hybrid electric vehicles, respectively.

- Ans
- 1. 1, 2 and 3
 - 2. Only 1 and 2
 - 3. Only 2 and 3
 - 4. Only 1 and 3

Question ID : 630680557422
Option 1 ID : 6306802178746
Option 2 ID : 6306802178743
Option 3 ID : 6306802178744
Option 4 ID : 6306802178745
Status : Not Answered
Chosen Option : --

Q.20 Which of the following statements is/are correct about Panchayat Samiti?

1. The strength of a Panchayat Samiti depends on the population in a samiti area.
2. All the Sarpanchs of Gram Panchayats are not members of Panchayat Samitis at the same time.
3. The Samiti is equipped with the administrative machinery called the Chief Executive Officer.

- Ans
- 1. Only 1
 - 2. Only 2 and 3
 - 3. Only 1 and 2
 - 4. Only 3

Question ID : 630680557445
Option 1 ID : 6306802178835
Option 2 ID : 6306802178838
Option 3 ID : 6306802178836
Option 4 ID : 6306802178837
Status : Answered
Chosen Option : 1

Section : Numerical Aptitude

Q.1 Let x be the least number of 5 digits, which when divided by 28, 40, 42 and 48, leaves remainder 6 in each case and x is divisible by 246. What is the sum of the digits of x ?

- Ans
- 1. 15
 - 2. 14
 - 3. 12
 - 4. 13

Question ID : 630680557579
Option 1 ID : 6306802179378
Option 2 ID : 6306802179377
Option 3 ID : 6306802179375
Option 4 ID : 6306802179376
Status : Not Attempted and Marked For Review
Chosen Option : --

Q.2 The present population of a town is 98000. It increases every year at the rate of 40 percent. What was the population of the town 2 years ago?

- Ans
- 1. 55000
 - 2. 45000
 - 3. 60000
 - 4. 50000

Question ID : 630680557693
Option 1 ID : 6306802179831
Option 2 ID : 6306802179833
Option 3 ID : 6306802179832
Option 4 ID : 6306802179834
Status : Answered
Chosen Option : 4

Q.3 A shopkeeper sells an item by giving 25% discount on its marked price and still gains 35%. If the cost price of the item decreases by 10%, and he sells it by allowing 37.5% discount on the same marked price, then his gain percentage will be _____.

- Ans
- 1. 20.5%
 - 2. 25.5%
 - 3. 25%
 - 4. 30%

Question ID : 630680557603
Option 1 ID : 6306802179471
Option 2 ID : 6306802179473
Option 3 ID : 6306802179472
Option 4 ID : 6306802179474
Status : Not Attempted and Marked For Review
Chosen Option : --

Q.4 The ratio of M, N and S is 2 : 7 : 9 respectively. If their sum is 360, then what is the difference between M and S?

- Ans
- 1. 160
 - 2. 180
 - 3. 140
 - 4. 120

Question ID : 630680557717
Option 1 ID : 6306802179927
Option 2 ID : 6306802179929
Option 3 ID : 6306802179928
Option 4 ID : 6306802179930
Status : Answered
Chosen Option : 3

Q.5 A certain sum (in ₹) is divided between A, B and C such that the ratio of shares of A and B is 3 : 1, that of B and C is 5 : 3 and that of C and D is also 5 : 3. If the difference between the shares of B and D is ₹1,280, then what is the difference (in ₹) of shares of A and C?

- Ans
- 1. 6,400
 - 2. 4,000
 - 3. 4,800
 - 4. 5,600

Question ID : 630680557605
Option 1 ID : 6306802179482
Option 2 ID : 6306802179479
Option 3 ID : 6306802179480
Option 4 ID : 6306802179481
Status : Answered
Chosen Option : 3

Q.6 A can complete a certain work in 36 days. B is $33\frac{1}{3}\%$ less efficient than A and C is 50% less efficient than B. All the three started the work together, but A left 9 days after the start of the work and B left 3 days before the completion of the work. In how many days was the whole work completed?

- Ans
- 1. 30
 - 2. 28
 - 3. 32
 - 4. 29

Question ID : 630680557618
Option 1 ID : 6306802179533
Option 2 ID : 6306802179531
Option 3 ID : 6306802179534
Option 4 ID : 6306802179532
Status : Answered
Chosen Option : 4

Q.7 If $x^2 + \frac{1}{x^2} = 10$, then what is the value of $x^4 + \frac{1}{x^4}$?

- Ans
- 1. 102
 - 2. 100
 - 3. 98
 - 4. 96

Question ID : 630680557729
Option 1 ID : 6306802179975
Option 2 ID : 6306802179978
Option 3 ID : 6306802179976
Option 4 ID : 6306802179977
Status : Answered
Chosen Option : 3

Q.8 In an election between two candidates A and B, 15% of the voters did not cast their votes, 20% of the votes cast were declared invalid. The winning candidate got 8262 votes, which were 54% of the total valid votes.

Statement I: The candidate who was defeated got votes from 31.28 % of the total voters in the list.

Statement II: The number of valid votes was 15500.

Which of the above statements is/are correct?

- Ans
- 1. Neither I nor II
 - 2. II only
 - 3. Both I and II
 - 4. I only

Question ID : 630680557586
Option 1 ID : 6306802179406
Option 2 ID : 6306802179404
Option 3 ID : 6306802179405
Option 4 ID : 6306802179403
Status : Not Attempted and Marked For Review
Chosen Option : --

Q.9 In a company there are 44 employees. The average salary of 30 employees is ₹4200 per month and the average salary of 10 employees among remaining 14 employees is ₹6200 per month. If the average salary of all employees is ₹7400 per month, then what is the per month average salary of the remaining 4 employees?

- Ans
- 1. ₹35600
 - 2. ₹34400
 - 3. ₹42200
 - 4. ₹37800

Question ID : 630680557646
Option 1 ID : 6306802179643
Option 2 ID : 6306802179644
Option 3 ID : 6306802179646
Option 4 ID : 6306802179645
Status : Answered
Chosen Option : 2

Q.1 The product of the three consecutive odd numbers is 2145. What is the Square of the middle number?

- 0 1. 121
Ans 2. 225
 3. 169
 4. 289

Question ID : 630680557676
Option 1 ID : 6306802179763
Option 2 ID : 6306802179764
Option 3 ID : 6306802179765
Option 4 ID : 6306802179766
Status : Answered
Chosen Option : 3

Q.11 P and R are at a distance of 296 km from each other at 7:45 a.m. After 15 minutes, P starts moving towards R at the speed of 32 km/hr. At 8:30 a.m. R starts moving towards P at the speed of 8 km/hr. At what time will they meet?

- Ans 1. 3:30 pm
 2. 2:45 pm
 3. 4:50 pm
 4. 4:20 pm

Question ID : 630680557727
Option 1 ID : 6306802179967
Option 2 ID : 6306802179969
Option 3 ID : 6306802179970
Option 4 ID : 6306802179968
Status : Answered
Chosen Option : 2

Q.1 A sum of ₹1200 becomes ₹1560 at the rate of simple interest in 3 years. In how many years will the sum of ₹800 amounts to ₹1120 at the same rate of simple interest?

- 2 1. 5 years
Ans 2. 6 years
 3. 4 years
 4. 3 years

Question ID : 630680557649
Option 1 ID : 6306802179657
Option 2 ID : 6306802179658
Option 3 ID : 6306802179656
Option 4 ID : 6306802179655
Status : Answered
Chosen Option : 3

Q.13 A question is given, followed by three statements labelled I, II and III. Identify which of the statements is/are sufficient to answer the question.

Question:

What is the time (in second) taken by A to run the race?

Statements:

- I. A beats B by 30 seconds and B beats C by 60 seconds.
- II. A beats C by 90 seconds.
- III. B's speed is the average of A's speed and C's speed.

- Ans
- 1. I and II
 - 2. II and III
 - 3. I, II and III
 - 4. I and III

Question ID : 630680557629
Option 1 ID : 6306802179575
Option 2 ID : 6306802179577
Option 3 ID : 6306802179578
Option 4 ID : 6306802179576
Status : Not Answered
Chosen Option : --

Q.14 The simple interest on a sum for 6 years is ₹29250. The rate of interest for the first 2 years is 7 percent per annum and for the next 4 years is 16 percent per annum. What is the sum?

- Ans
- 1. ₹37500
 - 2. ₹38300
 - 3. ₹35400
 - 4. ₹36600

Question ID : 630680557659
Option 1 ID : 6306802179696
Option 2 ID : 6306802179698
Option 3 ID : 6306802179697
Option 4 ID : 6306802179695
Status : Answered
Chosen Option : 1

Q.15 In a village, 90 percent people of the total population are literate and the remaining are illiterate. If the number of illiterate people is 1320, then what is the total population of village?

- Ans
- 1. 13000
 - 2. 12000
 - 3. 12200
 - 4. 13200

Question ID : 630680557687
Option 1 ID : 6306802179807
Option 2 ID : 6306802179808
Option 3 ID : 6306802179809
Option 4 ID : 6306802179810
Status : Answered
Chosen Option : 4

Q.16 Which of the following statements is/are correct?

(a) $\Sigma (n^2 - n) = 330, n = 1, 2, \dots, 10$

(b) $\Sigma (n^2 + n) = 728, n = 1, 2, \dots, 12$

(c) $\Sigma (n^2 + 3n + 1) = 352, n = 1, 2, \dots, 8$

Ans 1. (a) and (b)

2. (b) and (c)

3. (a) only

4. (b) only

Question ID : 630680557584

Option 1 ID : 6306802179397

Option 2 ID : 6306802179398

Option 3 ID : 6306802179395

Option 4 ID : 6306802179396

Status : Not Answered

Chosen Option : --

Q.17 Select the option that is true regarding the following labelled Assertion (A) and Reason (R).

| Assertion (A) | Reason (R) |
|---|--|
| The cost of 3 vadas and 4 samosas is ₹195. If the cost of a samosa increases by 10% and that of a vada decreases by one-fifth, the cost of 2 vadas and 3 samosas is ₹139. The original cost of 2 vadas and 1 samosa is ₹80. | Let cost of 1 vada and 1 samosa is ₹ x and ₹ y, respectively. $3x + 4y = 195$ and $2 \times (1.1)x + 3 \times \frac{1}{5}y = 139.$ |

Ans 1. A is true and R is false.

2. A is false and R is true.

3. Both A and R are true and R is a correct explanation of A.

4.

Both A and R are true but R is not a correct explanation of A.

Question ID : 630680560599

Option 1 ID : 6306802191390

Option 2 ID : 6306802191391

Option 3 ID : 6306802191388

Option 4 ID : 6306802191389

Status : Not Attempted and

Marked For Review

Chosen Option : --

Q.18 The average weight of some students in a section is 35.5 kg. Twelve of them whose average weight is 37 kg leave the section and another 5 students with weights 40 kg, 39.5 kg, 38.5 kg, 42 kg and 47.5 kg join the section, and thereby the average weight of the students in the section increases by 300 g. The number of students, initially, in the section, was:

- Ans
- 1. 47
 - 2. 49
 - 3. 53
 - 4. 45

Question ID : 630680557568
Option 1 ID : 6306802179332
Option 2 ID : 6306802179333
Option 3 ID : 6306802179334
Option 4 ID : 6306802179331
Status : Not Attempted and Marked For Review
Chosen Option : --

Q.19 A question is given, followed by three statements labelled I, II and III. Identify which of the statements is/are sufficient to answer the question.

Question:

What is the value of A when $D = 7$?

Statements:

- I. A varies directly with the sum of B and C, B varies directly with D and C varies directly with D^2 .
- II. When $D = 3$, $A = 33$.
- III. When $D = 4$, $A = 52$.

- Ans
- 1. I, II and III
 - 2. I and III
 - 3. I and II
 - 4. I only

Question ID : 630680557615
Option 1 ID : 6306802179522
Option 2 ID : 6306802179521
Option 3 ID : 6306802179520
Option 4 ID : 6306802179519
Status : Not Answered
Chosen Option : --

Q.2 Selling price of a bat is ₹1144 and profit percentage is 30 percent. If selling price is ₹704, then what will be the loss percentage?

- 0
Ans
- 1. 18 percent
 - 2. 20 percent
 - 3. 15 percent
 - 4. 10 percent

Question ID : 630680557699
Option 1 ID : 6306802179856
Option 2 ID : 6306802179857
Option 3 ID : 6306802179855
Option 4 ID : 6306802179858
Status : Answered
Chosen Option : 2

Q.1 In the following question, select the missing number from the given series.

60, 64, 72, 88, 120, ?

- Ans
- 1. 210
 - 2. 180
 - 3. 190
 - 4. 184

Question ID : 630680557367
Option 1 ID : 6306802178526
Option 2 ID : 6306802178524
Option 3 ID : 6306802178525
Option 4 ID : 6306802178523
Status : Answered
Chosen Option : 4

Q.2 If $112\ M\ 84\ N\ 251 = 447$ and $35\ M\ 45\ N\ 59 = 139$, then $224\ M\ 89\ N\ 131 = ?$

- Ans
- 1. 360
 - 2. 450
 - 3. 444
 - 4. 458

Question ID : 630680557374
Option 1 ID : 6306802178554
Option 2 ID : 6306802178551
Option 3 ID : 6306802178552
Option 4 ID : 6306802178553
Status : Answered
Chosen Option : 3

Q.3 There are seven persons Prakash, Nilanjan, Rohit, Jay, Saman, Sanjay and Veer whose ages are 55, 34, 56, 42, 36, 30 and 25 (all in years) but not necessarily in same order.

- Rohit who is elder brother of Jay is younger than Nilanjan.
- Sanjay is only younger than Veer but older than Saman.
- Nilanjan is the younger brother of Prakash who is 4th youngest as well as 4th oldest among group.

Which of the following statement is true based on the above information?

- I. Saman age is 42 years
- II. Jay is youngest in all.

- Ans
- 1. Both I and II
 - 2. Only I
 - 3. Neither I nor II
 - 4. Only II

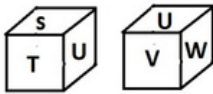
Question ID : 630680556922
Option 1 ID : 6306802176601
Option 2 ID : 6306802176599
Option 3 ID : 6306802176602
Option 4 ID : 6306802176600
Status : Answered
Chosen Option : 1

Q.4 Five towns A, B, C, D and E are visited by a person from Monday to Friday. On each day the person visits only one town. The person visits A on Monday. He visits E on the next day of D. B and C are not visited on Friday. Who among the following can visit on Wednesday?

- Ans
- 1. E
 - 2. D
 - 3. B
 - 4. A

Question ID : 630680557285
Option 1 ID : 6306802178196
Option 2 ID : 6306802178198
Option 3 ID : 6306802178197
Option 4 ID : 6306802178195
Status : Answered
Chosen Option : 3

Q.5 Six letters S, T, U, V, W and X are written on different faces of a dice. Two positions of this dice are shown in the figure. Which letter will be opposite to X?



- Ans
- 1. W
 - 2. S
 - 3. T
 - 4. U

Question ID : 630680556957
Option 1 ID : 6306802176742
Option 2 ID : 6306802176739
Option 3 ID : 6306802176740
Option 4 ID : 6306802176741
Status : Answered
Chosen Option : 4

Q.6 A series is given with one term missing. Select the correct alternative from the given ones that will complete the series.
QRST, UVWX, YZAB, CDEF, ?

- Ans
- 1. TQRN
 - 2. GHIJ
 - 3. EMRN
 - 4. GHMJ

Question ID : 630680557340
Option 1 ID : 6306802178417
Option 2 ID : 6306802178416
Option 3 ID : 6306802178415
Option 4 ID : 6306802178418
Status : Answered
Chosen Option : 2

Q.7 In this question, a question is followed by two statements numbered (I) and (II). You have to decide whether the data provided in the statements are sufficient to answer the question. Read both the statements and decide the appropriate answer.

Q. Who got the least apples among all?

(I) Prerna got more apples than Rajiv. Ganga got as many apples as Vidya did.

(II) Ankita got fewer apples than Manasvi. Rajiv got more apples than Ganga. Manasvi got fewer apples than Vidya.

Ans 1.

Data in statements I and II together are NOT sufficient to answer the question.

2.

Data in statements I and II together are necessary to answer the question.

3.

Data in Statement I alone is sufficient to answer the question while data in statement II is not.

4.

Data in Statement II alone is sufficient to answer the question while data in statement I is not.

Question ID : 630680556937
Option 1 ID : 6306802176662
Option 2 ID : 6306802176661
Option 3 ID : 6306802176659
Option 4 ID : 6306802176660
Status : Not Answered
Chosen Option : --

Q.8 There are seven persons Anand, Bipin, Chaman, Deepak, Eashan, Farhan and Gagan are sitting around a circular table but not necessarily in same order. Each of them is either facing the Centre or facing outside (opposite to the center).

- There are three persons facing towards center and others are facing outside.
- Two inward facing persons are sitting together.
- Gagan is sitting between two persons Bipin and Deepak who are facing outside direction.
- Farhan is sitting between Eashan and Deepak.
- There are exactly two inward facing persons are sitting between Eashan and Bipin.
- Farhan is sitting second to the left of Gagan.
- Gagan is facing towards center.
- Anand is never sitting next to Bipin.

Which of the following statement is / are true based on the given arrangement?

- I. Anand and Gagan are facing towards center.
- II. Chaman and Gagan are facing towards center.
- III. Chaman, Bipin and Deepak are facing towards outside direction.

Ans 1. Only I is true.

2. All I, II and III are true.

3. Only II is true.

4. Both I and II are true.

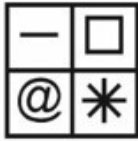
Question ID : 630680556911
Option 1 ID : 6306802176555
Option 2 ID : 6306802176558
Option 3 ID : 6306802176556
Option 4 ID : 6306802176557
Status : Not Answered
Chosen Option : --

Q.9 In the following question, select the figure which can be placed at the sign of question mark (?) from the given alternatives.




Ans

✓ 1.



✗ 2.



✗ 3.



✗ 4.



Question ID : 630680557348
 Option 1 ID : 6306802178448
 Option 2 ID : 6306802178450
 Option 3 ID : 6306802178449
 Option 4 ID : 6306802178447
 Status : Answered
 Chosen Option : 1

Q.10 BAKE is related to YZPV in a certain way based on the English alphabetical order. In the same way, FOUR is related to ULFI. Which of the following are correct matches following the same logic?

| | |
|-----------|----------|
| i. GOOD | (W) GIVV |
| ii. ZERO | (X) AVIL |
| iii. TREE | (Y) TLLW |
| iv. KEEP | (Z) PVVK |

Ans

✗ 1. ii-W only

✗ 2. i-Y only

✗ 3. iii-Y , i-W, iv-Z only

✓ 4. i-Y, ii-X, iii-W only

Question ID : 630680556934
 Option 1 ID : 6306802176649
 Option 2 ID : 6306802176647
 Option 3 ID : 6306802176650
 Option 4 ID : 6306802176648
 Status : Answered
 Chosen Option : 4

Q.11 In the following question, four letter pairs are given. The letters on left side of (–) is related to the letters on the right side of (–) with some Logic/Rule/Relation. Three are similar on basis of same Logic/Rule/Relation. Select the odd one out from the given alternatives.

- Ans
- 1. DS – KZ
 - 2. WL – DS
 - 3. NC – UJ
 - 4. MO – SW

Question ID : 630680557326
Option 1 ID : 6306802178359
Option 2 ID : 6306802178361
Option 3 ID : 6306802178362
Option 4 ID : 6306802178360
Status : Answered
Chosen Option : 4

Q.12 In the following question below are given some statements followed by some conclusions based on those statements. Taking the given statements to be true even if they seem to be at variance from commonly known facts. Read all the conclusions and then decide which of the given conclusion logically follows the given statements.

Statements:

- I. All Colour are Red.
- II. Some Yellow are Red.

Conclusion:

- I. All Yellow are Colour.
- II. Some Red are Yellow.

- Ans
- 1. Only conclusion I follows.
 - 2. Both conclusions I and II follows.
 - 3. Neither conclusion follows.
 - 4. Only conclusion II follows.

Question ID : 630680557320
Option 1 ID : 6306802178335
Option 2 ID : 6306802178337
Option 3 ID : 6306802178338
Option 4 ID : 6306802178336
Status : Answered
Chosen Option : 4

Q.13 In the following number-pairs, the second number is obtained by applying certain mathematical operations to the first number. Which numbers should replace X and Y so that the pattern followed by the two numbers on the left side of :: is same as that on the right side of :: ?

(NOTE: Operations should be performed on the whole numbers, without breaking down the numbers into its constituent digits. E.g. 13 – Operations on 13 such as adding / subtracting /multiplying etc. to 13 can be performed. Breaking down 13 into 1 and 3 and then performing mathematical operations on 1 and 3 is not allowed)

X : 120 :: 4 : Y

- Ans
- 1. X=6, Y=90
 - 2. X=5, Y=60
 - 3. X=9, Y=140
 - 4. X=5, Y=70

Question ID : 630680556967
Option 1 ID : 6306802176781
Option 2 ID : 6306802176780
Option 3 ID : 6306802176782
Option 4 ID : 6306802176779
Status : Not Answered
Chosen Option : --

Q.14 If a mirror is placed on the line AB, then out of the option figures which figure will be the right image of the question figure?



Ans

1.



2.



3.



4.



Question ID : 630680557353
 Option 1 ID : 6306802178470
 Option 2 ID : 6306802178469
 Option 3 ID : 6306802178468
 Option 4 ID : 6306802178467
 Status : Answered
 Chosen Option : 3

Q.15 In the following question below are given some statements followed by some conclusions based on those statements. Taking the given statements to be true even if they seem to be at variance from commonly known facts. Read all the conclusions and then decide which of the given conclusion logically follows the given statements.

Statements:

I. All R are Q.

II. All M are R.

Conclusion:

I. All M are Q.

II. Some Q are R.

Ans 1. Both conclusions I and II follows.

2. Only conclusion I follows.

3. Neither conclusion follows.

4. Only conclusion II follows.

Question ID : 630680557312
 Option 1 ID : 6306802178305
 Option 2 ID : 6306802178303
 Option 3 ID : 6306802178306
 Option 4 ID : 6306802178304
 Status : Answered
 Chosen Option : 1

Q.16 Read the following information carefully and answer the question that follows. You must assume everything in the statement to be true and decide which of the conclusion/s logically follow/s.

• The city of Green Valley has experienced a surge in cases of a rare respiratory illness in the past month. Public health officials identified a recently opened chemical factory as the source of the outbreak, tracing the illness to airborne toxins emitted from the factory. The factory manager initially denied responsibility and refused to shut down operations. However, following protests and mounting pressure from local residents and government officials, the factory has finally agreed to halt production temporarily. Which of the following can be concluded from the given information?

- A. The chemical factory will permanently shut down operations.
- B. The respiratory illness is highly contagious and can spread quickly through the air.
- C. Public health officials have effectively managed the outbreak and prevented further spread.
- D. Green Valley residents should avoid all outdoor activities to minimize exposure to the toxins.

Ans

- ✓ 1. Only B and D
- ✗ 2. Only A and D
- ✗ 3. Only A and C
- ✗ 4. Only B and C

Question ID : 630680556944
Option 1 ID : 6306802176688
Option 2 ID : 6306802176690
Option 3 ID : 6306802176687
Option 4 ID : 6306802176689
Status : Not Answered
Chosen Option : --

Q.17 After arranging the given words according to dictionary order, which word will come at 'Third' position?

- 1. Region
- 2. Register
- 3. Regim
- 4. Regional
- 5. Regimen

- Ans
- ✗ 1. Register
 - ✓ 2. Region
 - ✗ 3. Regimen
 - ✗ 4. Regional

Question ID : 630680557295
Option 1 ID : 6306802178236
Option 2 ID : 6306802178237
Option 3 ID : 6306802178238
Option 4 ID : 6306802178235
Status : Answered
Chosen Option : 2

Q.18 In a certain code language, 'TAP' is written as '60348' and 'CUT' is written as '96360'. Which of the following are correct matches as per the given code language?

| WORD | CODE |
|-----------|--------------|
| I. WORK | (W) 2132742 |
| II. GAIN | (X) 1215354 |
| III. DEAR | (Y) 69455433 |

- Ans
- 1. I-X only
 - 2. I-Y, II-W, III-X only
 - 3. I-X , II-W only
 - 4. III-Y , I-W only

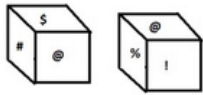
Question ID : 630680556923
Option 1 ID : 6306802176605
Option 2 ID : 6306802176604
Option 3 ID : 6306802176603
Option 4 ID : 6306802176606
Status : Not Answered
Chosen Option : --

Q.19 A @ B means A is the sister of B ;
A # B means A is the father of B ;
A & B means B is the wife of A.
Based on the above information, find out which of the given statements can be the reason/s behind the assertion made below if it is given that 'S @ M # T & U'
Assertion: S is the grand-daughter of Z?
Reason A: Z @ U
Reason B: Z @ M

- Ans
- 1. Both A and B are reasons behind the assertion
 - 2. Only A is the reason behind the assertion
 - 3. Only B is the reason behind the assertion
 - 4. Neither A nor B is the reason behind the assertion

Question ID : 630680556927
Option 1 ID : 6306802176619
Option 2 ID : 6306802176620
Option 3 ID : 6306802176621
Option 4 ID : 6306802176622
Status : Not Answered
Chosen Option : --

Q.20 Six symbols !, @, #, \$, %, and & are written on different faces of a dice. Two positions of this dice are shown in the figure. Which symbol will be opposite to &?



Ans 1. #

2. %

3. @

4. \$

Question ID : 630680556956
Option 1 ID : 6306802176736
Option 2 ID : 6306802176735
Option 3 ID : 6306802176738
Option 4 ID : 6306802176737
Status : Answered
Chosen Option : 3

Section : English

Q.1 Select the correct conclusion based on the meaning of the underlined word.

Statement: He got selected for this dance performance despite having so many problems with the overall idea. No doubt, the squeaky wheel gets the grease. _____

Conclusion:

I. The most reliable person in your life harms you.

II. A person with selfish motives always tries to grab everyone's attention.

Ans 1. Both conclusion I and II are correct

2. Neither conclusion I nor II is correct

3. Only conclusion I is correct

4. Only conclusion II is correct

Question ID : 630680556828
Option 1 ID : 6306802176197
Option 2 ID : 6306802176198
Option 3 ID : 6306802176195
Option 4 ID : 6306802176196
Status : Answered
Chosen Option : 4

Q.2 Identify the grammatically correct form of the given sentence.

Sentence: As the pedicurist painted her nail, Simran speaks softly without looking at me.

I. As the pedicurist paints her nail, Simran spoke softly without looking at me.

II. As the pedicurist painted her nail, Simran spoke softly without looking at me.

Ans

✓ 1. Only II is correct

✗ 2. Both I and II are correct

✗ 3. Neither I nor II is correct

✗ 4. Only I is correct

Question ID : 630680556891

Option 1 ID : 6306802176448

Option 2 ID : 6306802176449

Option 3 ID : 6306802176450

Option 4 ID : 6306802176447

Status : Answered

Chosen Option : 1

Q.3 Identify the grammatically correct form of the given sentence.

Sentence: Rita was been cooking for me for I left my job.

I. Rita has been cooking for me since I left my job.

II. Rita is cooking for me since I left my job.

III. Rita is been cook for me since I left my job.

Ans

✗ 1. Only III is correct

✗ 2. All I, II and III are correct

✗ 3. Only II and III are correct

✓ 4. Only I is correct

Question ID : 630680556902

Option 1 ID : 6306802176492

Option 2 ID : 6306802176494

Option 3 ID : 6306802176493

Option 4 ID : 6306802176491

Status : Answered

Chosen Option : 4

Q.4 Four sentences are given as options. Choose the option that contains the odd sentence.

Ans 1. ✓ material civilisation advances and the supply of available goods and services increases, man's needs also multiply.

2. ✗ World peace cannot be established without moral foundation.

3. ✗ The world today is wanting in moral values.

4. ✗ Everyone regardless of his or her attitude to religion resents being called devoid of moral sense.

Question ID :

Option 1 ID : 630680556709

Option 2 ID : 6306802175816

Option 3 ID : 6306802175818

Option 4 ID : 6306802175817

Option 4 ID : 6306802175815

Status : Answered

Chosen Option : 3

Q.5 Match the following words with their SYNONYMS.

| | List I | | List II |
|---|-------------|---|-------------|
| 1 | Hound | A | Deprivation |
| 2 | Bereavement | B | Chase |
| 3 | Jolly | C | Amused |

- Ans
- 1. 1-B, 2-A, 3-C
 - 2. 1-A, 2-B, 3-C
 - 3. 1-B, 2-C, 3-A
 - 4. 1-C, 2-A, 3-B

Question ID : 630680556854
Option 1 ID : 6306802176302
Option 2 ID : 6306802176299
Option 3 ID : 6306802176301
Option 4 ID : 6306802176300
Status : Answered
Chosen Option : 1

Q.6 Which of the following statements uses the given idiom correctly?

(i) When we vent our spleen we generally feel good.

(ii) Consult a doctor for controlling the damage to your system when you vent your spleen.

(iii) His latest article in the newspaper vents his spleen on bureaucracy and the prevalence of red-tapism.

- Ans
- 1. All the statements
 - 2. Only statements (ii) and (iii)
 - 3. Only statements (i) and (iii)
 - 4. Only statements (i) and (ii)

Question ID : 630680556755
Option 1 ID : 6306802176002
Option 2 ID : 6306802176001
Option 3 ID : 6306802176000
Option 4 ID : 6306802175999
Status : Not Answered
Chosen Option : --

Q.7 Select the option in which the word 'belligerent' is used correctly. Ans

- 1. The principal greeted the students and their awestruck, belligerent parents warmly on the reopening day.
- 2. The belligerent kids hugged each other and danced in joy true to their nature.
- 3. The belligerent litigant's behaviour made the judge reprimand him severely.
- 4. She was belligerent when she heard the good news of her winning a jackpot.

Question ID : 630680556728
Option 1 ID : 6306802175894
Option 2 ID : 6306802175893
Option 3 ID : 6306802175892
Option 4 ID : 6306802175891
Status : Not Answered
Chosen Option : --

Q.8 The five sentences labelled (1, 2, 3, 4, 5) given in this question. The first sentence is fixed and others when properly sequenced, form a coherent paragraph. Each sentence is labelled with a number. Decide on the proper order for the sentences and choose the correct option.

1. Pūtekeke are water birds native to New Zealand and have been known to make strange noises like barking, growling and clicking.
2. They are characterised by their distinctive plumage, alternating black and white feathers with colored head plumes.
3. Young pūtekeke are also capable of swimming and diving even after newly hatching.
4. The bird was almost hunted to extinction in the United Kingdom during the 19th century.
5. They are still under threat today, conservationists say.

- Ans
- 1. 15234
 - 2. 12345
 - 3. 12453
 - 4. 13452

Question ID : 630680556808
Option 1 ID : 6306802176118
Option 2 ID : 6306802176117
Option 3 ID : 6306802176115
Option 4 ID : 6306802176116
Status : Not Answered
Chosen Option : --

Q.9 Select the conclusion(s) that follow(s) based on the correct meaning of the underlined segment in the given sentence.

Sentence:

Always remember that mighty oaks from little acorns grow. Conclusion:

- (i) You cannot hope to grow a big plant by sowing tiny seeds.
- (ii) Some of the big business empires actually started off as small ventures.
- (iii) Even great men can be brought down by small scandals.

- Ans
- 1. Only Conclusion (iii)
 - 2. Only conclusion (i) and (iii)
 - 3. Only conclusion (ii)
 - 4. Only conclusion (i)

Question ID : 630680556767
Option 1 ID : 6306802176049
Option 2 ID : 6306802176050
Option 3 ID : 6306802176048
Option 4 ID : 6306802176047
Status : Not Answered
Chosen Option : --

Q.10 Select the correct conclusion based on the correct meaning of the word underlined in the following sentence.

Statement: His parents never thought that he would turn out to be a philistine. _____

Conclusion:

(i) A philistine as he is, he is proud of his beautiful collection of antiques.

(ii) We shouldn't have taken him to the museum of rare paintings, for he was anxious to get out soon.

(iii) Some are so practical-minded that even a vintage car is a pure mechanical device for them.

Ans

- 1. Only conclusion (ii) is correct
- 2. Only conclusion (i) is correct
- 3. Both conclusion (ii) and (iii) are correct
- 4. Both conclusion (i) and (iii) are correct

Question ID : 630680556744
Option 1 ID : 6306802175956
Option 2 ID : 6306802175955
Option 3 ID : 6306802175957
Option 4 ID : 6306802175958
Status : Not Answered
Chosen Option : --

Q.11 The passage given below has numbered blanks. Choose the word that best fits Blank 3.

Over the past decade, the sunflower sea star has gone from a predator of the Pacific Ocean to nearing extinction. The Nature Conservancy estimates that 5.75 billion sunflower sea stars died over three years, a 94% global (1) ____. The cause, scientists say, is largely climate change and warming waters, (2) ____, by sea star wasting disease. Hope is slowly on the horizon. The Birch Aquarium at Scripps Institution of Oceanography near San Diego successfully (3) ____ three sunflower sea stars recently, the latest success story in a sprawling collaborative effort. TBA has five sunflower stars, one of the largest populations of sunflower stars in (4) ____ in California. But until recently it did not know their gender. To determine the sex, researchers induced spawning. After further testing, they can determine whether the (5) ____ could survive disease or parasites. Once that's done, the aquarium will be able to begin the fertilization process.

Ans

- 1. spawned
- 2.
- instigated
- 3. produced
- 4.
- promoted

Question ID : 630680556749
Option 1 ID : 6306802175978
Option 2 ID : 6306802175977
Option 3 ID : 6306802175975
Option 4 ID : 6306802175976
Status : Not Answered
Chosen Option : --

Q.12 Match the following words with their antonyms.

| | List I | | List II |
|---|-----------|---|----------|
| 1 | Stuck | A | Reticent |
| 2 | Morbid | B | Cordial |
| 3 | Talkative | C | Freed |

Ans 1. 1-C, 2-B, 3-A

2. 1-C, 2-A, 3-B

3. 1-A, 2-B, 3-C

4. 1-B, 2-C, 3-A

Question ID : 630680556841
Option 1 ID : 6306802176248
Option 2 ID : 6306802176250
Option 3 ID : 6306802176247
Option 4 ID : 6306802176249
Status : Not Answered
Chosen Option : --

Q.13 Select the option in which the word 'ephemeral' is used correctly. Ans

1. The new desk we have bought is **ephemeral** and sturdy and will be stable for long.

2. Our life on this planet is **ephemeral** but the spirit is eternal.

3. All things **ephemeral** tend to have a lasting impact on culture and civilisation.

4. The cooling glasses that I wear are **ephemeral**— light but unbreakable.

Question ID : 630680556732
Option 1 ID : 6306802175909
Option 2 ID : 6306802175907
Option 3 ID : 6306802175908
Option 4 ID : 6306802175910
Status : Not Answered
Chosen Option : --

Q.14 Identify the grammatically correct form of the given sentence.

Sentence: After an few more polite speeches, he found himself dismissed.

I. After a few more polite speeches, he found himself the dismissed.

II. After a few more polite speeches, he found himself dismissed.

Ans 1. Both I and II are correct

2. Only I is correct

3. Only II is correct

4. Neither I nor II is correct

Question ID : 630680556864
Option 1 ID : 6306802176341
Option 2 ID : 6306802176339
Option 3 ID : 6306802176340
Option 4 ID : 6306802176342
Status : Not Answered
Chosen Option : --

Q.15 Four sentences are given below as four options. Choose the option that contains the odd sentence.

- Ans
1. ~~X~~ Failure to absorb the new graduates into the labour market seriously affects social cohesion in the community at large.
 2. ~~X~~ It is important to understand how work-based values inform behaviour in the labour market.
 3. Job seekers including fresh graduates and employers express values that are relevant to the workplace.
 4. ~~X~~ Employers' values influence the selection process and their treatment of the current employees.

Question ID : 630680556717
Option 1 ID : 6306802175848
Option 2 ID : 6306802175847
Option 3 ID : 6306802175849
Option 4 ID : 6306802175850
Status : Not Answered
Chosen Option : --

Q.16 Select the conclusion(s) that follow(s) based on the correct meaning of the word underlined in the following sentence.

Sentence:

He is actually an amateur photographer but some of his wildlife photographs have received wide acclaim.

Conclusion:

- (i) Magazines will give him special assignments because of his experience and expertise.
- (ii) He doesn't claim any special status among those who have photography as their career.
- (iii) He often criticises the work of professionals because he is one of them.

- Ans
1. ~~X~~ Only conclusion (i)
 2. Only conclusion (ii)
 3. ~~X~~ Only conclusion (ii) and (iii)
 4. ~~X~~ Only conclusion (i) and (iii)

Question ID : 630680556742
Option 1 ID : 6306802175947
Option 2 ID : 6306802175948
Option 3 ID : 6306802175949
Option 4 ID : 6306802175950
Status : Not Answered
Chosen Option : --

Q.17 Identify the grammatically correct form of the given sentence.

Sentence: My mother yelled at my father for purchasing red capsicum rather than green pepper.

I. My mother yelled at my father for purchasing red capsicum rather than green pepper.

II. My mother yelled at my father because he bought red capsicum instead of green pepper.

III. My mother yelled at my father for purchasing red capsicum despite of green pepper.

Ans

1. Only III is correct

2. Only I is correct

3. Only II is correct

4. Only I and II are correct

Question ID : 630680556876

Option 1 ID : 6306802176389

Option 2 ID : 6306802176387

Option 3 ID : 6306802176388

Option 4 ID : 6306802176390

Status : Not Answered

Chosen Option : --

Q.18 The sentences given below are numbered 1, 2, 3, 4, and so on.

They form a coherent paragraph when sequenced properly. Choose the option that gives the proper sequence.

1. Academics need to conduct and then publish their research.

2. It also represents spent future time as they revise or resubmit their manuscript.

3. While service and teaching also play an important role in their professional lives, academic publishing is a mainstay for tenure, promotion, and for impacting the directions of the field.

4. When this work does not reach its intended audience, the efforts of the author represent lost time that might have been more productively directed elsewhere.

5. A prospective author typically spends months or years working on a submission to a journal.

Ans

1. 54132

2. 35124

3. 13542

4. 42531

Question ID : 630680556725

Option 1 ID : 6306802175879

Option 2 ID : 6306802175881

Option 3 ID : 6306802175882

Option 4 ID : 6306802175880

Status : Not Answered

Chosen Option : --

Q.19 Match the following words with their SYNONYMS.

| | List I | | List II |
|---|------------|---|--------------|
| 1 | Guilt | A | Contribution |
| 2 | Inactive | B | Lethargic |
| 3 | Circumvent | C | Escape |

- Ans
- 1. 1-C, 2-A, 3-B
 - 2. 1-A, 2-B, 3-C
 - 3. 1-B, 2-C, 3-A
 - 4. 1-A, 2-C, 3-B

Question ID : 630680556860
Option 1 ID : 6306802176325
Option 2 ID : 6306802176323
Option 3 ID : 6306802176326
Option 4 ID : 6306802176324
Status : Not Answered
Chosen Option : --

Q.20 Select the correct conclusion based on the meaning of the underlined word.

Statement: His overnight success has taught me that you should never judge a book by its cover.

Conclusion:

- I. One should be beware of false appearances.
- II. We must not underestimate anyone based on their looks.

- Ans
- 1. Only conclusion II is correct
 - 2. Both conclusion I and II are correct
 - 3. Only conclusion I is correct
 - 4. Neither conclusion I nor II is correct

Question ID : 630680556831
Option 1 ID : 6306802176208
Option 2 ID : 6306802176209
Option 3 ID : 6306802176207
Option 4 ID : 6306802176210
Status : Not Answered
Chosen Option : --