

INTELLIGENCE BUREAU

(Ministry of Home Affairs)

Government of India

Participant ID	
Applica on no	
Participant Name	
Test Center Name	Aztech Online Test Centre
Test Date	17/01/2024
Test Time	8:30 AM - 9:30 AM
Subject	IB ACIO II Exe

Section : Current Affairs

Q.1 Consider the following statement about Hockey India Sub Junior Women South Zone Championship 2023:

- 1.It was the 2nd edition of such kind of tournament.
- 2.In this event Hockey Andhra Pradesh secured the top position with 12 points
- 3.Hockey Unit of Tamil Nadu have secured the 2nd position.

Which of the statement given above is/are correct?

Ans

- ✓ 1.Statement 2 and 3
- ✗ 2. All are correct
- ✗ 3.Only statement 3
- ✗ 4.Only statement 2

Question ID : 630680552537
Option 1 ID : 6306802160243
Option 2 ID : 6306802160244
Option 3 ID : 6306802160245
Option 4 ID : 6306802160242

Status : Not Answered

Chosen Option : --

Q.2 Frontal offset test in Bharat New Car Assessment Programme (NCAP) is performed at a speed of _____.

- Ans
- ✗ 1.70 kmph
- ✗ 2.75 kmph
- ✗ 3.82 kmph
- ✓ 4.64 kmph

Question ID : 630680552517
Option 1 ID : 6306802160163
Option 2 ID : 6306802160164
Option 3 ID : 6306802160165
Option 4 ID : 6306802160162

Status : Not Answered

Chosen Option : --

Q.3 Consider the following statement about the peace agreement done by Government of India in December 2023:

1. It was signed between United National Liberation Front (UNLF), Government of Manipur and Government of India
2. NRFM (earlier United Revolutionary Front) was formed on September 11, 2021
3. Around 25 leaders/cadres of National Revolutionary Front Manipur (NRFM- a Meitei UG outfit) led by Major Boicha (Vice Chief of Army Staff of NRFM) along with 50 weapons have joined UNLF on 22nd December, 2023.

Which of the statement given above is/are correct?

Ans

- ☐ 1. Statement 1 and 2
- ☐ 2. Only statement 2
- ☒ 3. Only statement 1
- ☐ 4. All are correct

Question ID : 630680552544
Option 1 ID : 6306802160272
Option 2 ID : 6306802160271
Option 3 ID : 6306802160270
Option 4 ID : 6306802160273
Status : Not Answered
Chosen Option : --

Q.4 Consider the following statements about Mitrashakti 2023:

1. It is a naval exercise
2. It is the joint exercise of India and Sri Lanka
3. The exercise has been conducted from 16th to 29th November 2023.
4. It is aimed at fostering a deeper understanding of each other's operational strategies and tactics

Which of the statement given above is/are correct?

Ans

- ☐ 1. Statement 1, 2 and 3
- ☐ 2. All are correct
- ☐ 3. Statement 1, 3, 4
- ☒ 4. Statement 2 and 3

Question ID : 630680552540
Option 1 ID : 6306802160255
Option 2 ID : 6306802160256
Option 3 ID : 6306802160257
Option 4 ID : 6306802160254
Status : Not Answered
Chosen Option : --

Q.5 Orunodoi 2.0 is launched by which of the following states?

Ans

- ☐ 1. Rajasthan
- ☐ 2. Manipur
- ☒ 3. Assam
- ☐ 4. Jharkhand

Question ID : 630680552523
Option 1 ID : 6306802160188
Option 2 ID : 6306802160186
Option 3 ID : 6306802160189
Option 4 ID : 6306802160187
Status : Not Answered
Chosen Option : --

Q.6 Who is appointed as the new DGCA Chief in Jan 2023?

- Ans
- ☐ 1. Bir Singh Rai
 - ☐ 2. Ravi Krishna
 - ☐ 3. D.C Sharma
 - ☒ 4. Vikram Dev Dutt

Question ID : 630680552522
Option 1 ID : 6306802160184
Option 2 ID : 6306802160182
Option 3 ID : 6306802160185
Option 4 ID : 6306802160183
Status : Answered
Chosen Option : 4

Q.7 Which of the following city is recognized as city of music by UNESCO's Creative Cities Network?

- Ans
- ☐ 1. Srinagar
 - ☐ 2. Jaipur
 - ☐ 3. New Delhi
 - ☒ 4. Gwalior

Question ID : 630680552518
Option 1 ID : 6306802160166
Option 2 ID : 6306802160169
Option 3 ID : 6306802160167
Option 4 ID : 6306802160168
Status : Answered
Chosen Option : 4

Q.8 Consider the following statement about India's first Regional Rapid Transit System(RRTS):

1. It was inaugurated by Prime Minister Narendra Modi
2. It was inaugurated on 20 October 2023
3. It comes under Ministry of Housing & Urban Affairs
4. Delhi-Ghaziabad-Meerut RRTS corridor is the first RRTS corridor in India.

Which of the statement given above is/are incorrect?

- Ans
- ☒ 1. None of given statement
 - ☐ 2. Statement 2 and 3
 - ☐ 3. Statement 4
 - ☐ 4. Statement 1

Question ID : 630680552546
Option 1 ID : 6306802160280
Option 2 ID : 6306802160279
Option 3 ID : 6306802160281
Option 4 ID : 6306802160278
Status : Answered
Chosen Option : 2

Q.9 What is India's rank in Climate Change Performance Index in 2023?

- Ans ☒ 1. 8th
☐ 2. 5th
☐ 3. 7th
☐ 4. 6th

Question ID : 630680552524
Option 1 ID : 6306802160190
Option 2 ID : 6306802160193
Option 3 ID : 6306802160191
Option 4 ID : 6306802160192
Status : Answered
Chosen Option : 3

Q.10 What is the rank of India in Global Innovation Index 2023?

- Ans ☐ 1. 8th
☐ 2. 23rd
☒ 3. 40th
☐ 4. 34th

Question ID : 630680552520
Option 1 ID : 6306802160174
Option 2 ID : 6306802160175
Option 3 ID : 6306802160177
Option 4 ID : 6306802160176
Status : Answered
Chosen Option : 2

Q.11 Consider the following statement about "Miyawaki" Plantation Method:

1. In December 2023, in a bid to boost forest cover in the coal belt region of Chhattisgarh, Coal India Ltd subsidiary, South Eastern Coalfields Ltd (SECL) will undertake plantation using the Miyawaki method for the first time in its operational areas.
2. The Miyawaki method of plantation was pioneered in the 90s by Spanish botanist and expert in plant ecology Mr. Akira Miyawaki.
3. This technique of plantation involves planting native trees, shrubs and groundcover plants within every square metre.

Which of the statement given above is/are correct?

- Ans ☐ 1. Statement 2 and 3
☐ 2. Only statement 2
☐ 3. All are correct
☒ 4. Statement 1 and 3

Question ID : 630680552545
Option 1 ID : 6306802160275
Option 2 ID : 6306802160274
Option 3 ID : 6306802160276
Option 4 ID : 6306802160277
Status : Not Answered
Chosen Option : --

Q.12 Who among the following are the first-ever brother-sister duo to become Grandmasters in chess?

- Ans
- ☐ 1. Padmini Rout and Parimarjan Rout
 - ☐ 2. Priya Gupta and Abhijeet Gupta
 - ☐ 3. Vantika Agrawal and Suri Agrawal
 - ☒ 4. Vaishali Rameshbabu and Praggnanandhaa

Question ID : 630680552519
Option 1 ID : 6306802160172
Option 2 ID : 6306802160171
Option 3 ID : 6306802160173
Option 4 ID : 6306802160170
Status : Answered
Chosen Option : 4

Q.13 Consider the following statement about "Project UDBHAV":

1. Rajnath Singh inaugurated 'Project Udbhav'.
 2. This project has been launched in October 2023.
 3. It is an initiative by the Indian Army to blend ancient wisdom with modern military methods for tackling current security challenges
- Which of the statement given above is/are correct?

- Ans
- ☐ 1. Only statement 3
 - ☒ 2. All are correct
 - ☐ 3. Only statement 2
 - ☐ 4. Statement 2 and 3

Question ID : 630680552541
Option 1 ID : 6306802160261
Option 2 ID : 6306802160260
Option 3 ID : 6306802160258
Option 4 ID : 6306802160259
Status : Answered
Chosen Option : 2

Q.14 Bharatiya Nyaya Sanhita was introduced in Lok Sabha to replace_____.

- Ans
- ☐ 1. Indian Criminal Code
 - ☐ 2. Indian Civil Code
 - ☒ 3. Indian Penal Code
 - ☐ 4. Indian Code of Conduct

Question ID : 630680552521
Option 1 ID : 6306802160179
Option 2 ID : 6306802160180
Option 3 ID : 6306802160178
Option 4 ID : 6306802160181
Status : Answered
Chosen Option : 1

Q.15 Match the list 1 and list 2 and select the correct answer using the code given below.

List 1 (Chatbot)	List 2 (Company)
A. Q	1. OpenAI
B. Bard	2. IndiGo
C. 6Eskai	3. Google
D. ChatGPT	4. Amazon

Ans ☒ 1. A-4 B-3 C-2 D-1

☒ 2. A-2 B-3 C-1 D-4

☒ 3. A-2 B-3 C-4 D-1

☒ 4. A-4 B-2 C-1 D-3

Question ID : 630680552539

Option 1 ID : 6306802160253

Option 2 ID : 6306802160251

Option 3 ID : 6306802160250

Option 4 ID : 6306802160252

Status : Answered

Chosen Option : 3

Q.16 Consider the following statement about NISAR:

1. It is a microwave remote sensing satellite for Earth observation
2. It is a joint mission of India and USA
3. It's full form is NASA-ISRO Synthetic Aperture Radar
4. It is targeted for launch onboard India's GSLV

Which of the statement given above is/are correct?

Ans

☒ 1. Only statement 2 and 4

☒ 2. Statement 2 and 3

☒ 3. Only statement 1, 3, 4

☒ 4. All are correct

Question ID : 630680552538

Option 1 ID : 6306802160246

Option 2 ID : 6306802160247

Option 3 ID : 6306802160249

Option 4 ID : 6306802160248

Status : Not Answered

Chosen Option : --

Q.17 As per Financial Assistance for Promotion of Guru-Shishya Parampara scheme of Ministry of Culture,

Ans ☒ 1. support is provided to 1 Guru and maximum 18 Shishyas in the field of theatre

☒ 2. support is provided to 1 Guru and maximum 15 Shishyas in the field of theatre

☒ 3. support is provided to 1 Guru and maximum 10 Shishyas in the field of theatre

☒ 4. support is provided to 1 Guru and maximum 12 Shishyas in the field of theatre

Question ID : 630680552525

Option 1 ID : 6306802160197

Option 2 ID : 6306802160196

Option 3 ID : 6306802160194

Option 4 ID : 6306802160195

Status : Answered

Chosen Option : 3

Q.18 Consider the following statement about "Women Reservation Act 2023":

1. Provides 33 percent reservation to women in state assemblies and Lok Sabha
2. It is related to the 106th constitutional amendment act of the Indian constitution
3. Through this act reservation will be provided for the next 10 years which can be extended in future.
4. Article 330A is inserted through this amendment

Which of the statement given above is/are correct?

- Ans
- ☒ 1. Statement 1, 2 and 4
 - ☐ 2. Statement 2,3 and 4
 - ☐ 3. All are correct
 - ☐ 4. Statement 1, 2 and 3

Question ID : 630680552542
Option 1 ID : 6306802160265
Option 2 ID : 6306802160262
Option 3 ID : 6306802160264
Option 4 ID : 6306802160263
Status : Answered
Chosen Option : 1

Q.19 Sacred Ensembles of the Hoysalas which was declared as a UNESCO world heritage site in 2023 is located in _____.

- Ans
- ☒ 1. Karnataka
 - ☐ 2. Chhattisgarh
 - ☐ 3. Odisha
 - ☐ 4. Andhra Pradesh

Question ID : 630680552526
Option 1 ID : 6306802160200
Option 2 ID : 6306802160201
Option 3 ID : 6306802160198
Option 4 ID : 6306802160199
Status : Answered
Chosen Option : 2

Q.20 As of December 2023, which among the following schemes are related with the Ministry of Minority Affairs:

1. Pradhan Mantri Jan Vikas Karyakram
2. Saksham Scholarship Scheme
3. Pragati Scholarship
4. Beti Bachao Beti Padhao

- Ans
- ☒ 1. Only 1
 - ☐ 2. Only 4
 - ☐ 3. 2 and 3
 - ☐ 4. 1 and 2

Question ID : 630680552543
Option 1 ID : 6306802160266
Option 2 ID : 6306802160269
Option 3 ID : 6306802160268
Option 4 ID : 6306802160267
Status : Answered
Chosen Option : 4

Q.1 Which of the following were the aspects of the green revolution?

- A) Using High Yielding Varieties seeds
- B) Mechanization of Agriculture
- C) Use of Chemical Fertilizers and Pesticides
- D) Irrigation

Ans ☒ 1. B, C, D only
☒ 2. A, B, C only
☒ 3. A, B, C, D
☒ 4. A, C, D only

Question ID : 630680552816
Option 1 ID : 6306802161359
Option 2 ID : 6306802161358
Option 3 ID : 6306802161361
Option 4 ID : 6306802161360
Status : Answered
Chosen Option : 2

Q.2 The term 'secular' was added to the Preamble of the Indian Constitution by _____. Ans

- ☒ 1. the 45th Constitutional Amendment Act of 1985.
- ☒ 2. the 42nd Constitutional Amendment Act of 1976.
- ☒ 3. the 42nd Constitutional Amendment Act of 1970.
- ☒ 4. the 40th Constitutional Amendment Act of 1968

Question ID : 630680552817
Option 1 ID : 6306802161365
Option 2 ID : 6306802161364
Option 3 ID : 6306802161363
Option 4 ID : 6306802161362
Status : Answered
Chosen Option : 2

Q.3 Consider the following statements:

- A) Judicial decisions are bound by precedent in common law, whereas quasi-judicial decisions are generally not.
- B) Judicial decisions may create new laws, but quasi-judicial decisions are based on existing law.

Ans ☒ 1. Neither A nor B is true
☒ 2. Only A is true
☒ 3. Both A and B is true
☒ 4. Only B is true

Question ID : 630680552818
Option 1 ID : 6306802161369
Option 2 ID : 6306802161366
Option 3 ID : 6306802161368
Option 4 ID : 6306802161367
Status : Answered
Chosen Option : 2

Q.4 Consider the following statements:

1. The Bhagavad Gita is part of the Mahabharata and is a dialogue between Krishna and Arjuna.
 2. Shankaracharya is associated with the Advaita Vedanta school of Hindu philosophy.
 3. The Rigveda is the oldest of the Vedas and contains hymns dedicated to various deities.
 4. The Natya Shastra, attributed to sage Bharata, is an ancient Indian treatise on the performing arts and is closely related to the expression of Hindu spirituality.
- Which of the statements above is/are correct?

Ans ☒ 1. 1, 2, 3, and 4

☐ 2. 2, 3, and 4 only

☐ 3. 1, 3, and 4 only

☐ 4. 1, 2, and 4 only

Question ID : 630680552832

Option 1 ID : 6306802161425

Option 2 ID : 6306802161424

Option 3 ID : 6306802161423

Option 4 ID : 6306802161422

Status : Answered

Chosen Option : 1

Q.5 Mamluk Dynasty was ended by which of the following rulers?

Ans ☒ 1. Jalal-ud-din Firuz Khilji

☐ 2. Timur

☐ 3. Qutb-ud-din Aibak

☐ 4. Ghiyas-ud-din Tughluq

Question ID : 630680552809

Option 1 ID : 6306802161331

Option 2 ID : 6306802161332

Option 3 ID : 6306802161333

Option 4 ID : 6306802161330

Status : Answered

Chosen Option : 2

Q.6 Consider the following statements:

1. The Tehri Dam, located on the Bhagirathi River in Uttarakhand, is the highest dam in India.
 2. The Kakrapar Atomic Power Plant is situated in Tapi, Gujarat.
 3. The Narora Atomic Power Station, situated in Uttar Pradesh, is a major contributor to India's nuclear energy production.
- Which of the statements above is/are correct?

Ans ☐ 1. 1 and 3 only

☒ 2. 1, 2 and 3

☐ 3. 1 and 2 only

☐ 4. 2 and 3 only

Question ID : 630680552834

Option 1 ID : 6306802161432

Option 2 ID : 6306802161433

Option 3 ID : 6306802161430

Option 4 ID : 6306802161431

Status : Answered

Chosen Option : 2

Q.7The literacy rate of males in India as per 2011 census is around_____. Ans

- ☐ 1. 79%
- ☐ 2. 74%
- ☒ 3. 82%
- ☐ 4. 76%

Question ID : 630680552814
Option 1 ID : 6306802161352
Option 2 ID : 6306802161350
Option 3 ID : 6306802161353
Option 4 ID : 6306802161351
Status : Answered
Chosen Option : 3

Q.8Ullambana is the festival of which of the following religion?

- Ans
- ☐ 1. Hinduism
 - ☒ 2. Buddhism
 - ☐ 3. Sikhism
 - ☐ 4. Jainism

Question ID : 630680552811
Option 1 ID : 6306802161338
Option 2 ID : 6306802161339
Option 3 ID : 6306802161340
Option 4 ID : 6306802161341
Status : Answered
Chosen Option : 4

Q.9Consider the following statements:

- 1.The Constitution (74th Amendment) Act, 1992 provides for the constitution of Wards Committees.
 - 2.The Twelfth Schedule of the Constitution lists the powers, authority, and responsibilities of Municipalities.
 - 3.Urban Local Governments in India include Municipal Corporations, Municipal Councils, and Nagar Panchayats depending on the size of the population.
- Which of the above statements are correct?

- Ans
- ☐ 1. 1 and 3 only
 - ☐ 2. 2 and 3 only
 - ☐ 3. 1 and 2 only
 - ☒ 4. 1, 2 and 3

Question ID : 630680552838
Option 1 ID : 6306802161447
Option 2 ID : 6306802161448
Option 3 ID : 6306802161446
Option 4 ID : 6306802161449
Status : Answered
Chosen Option : 4

Q.10 Who among the following was the minister who helped King Ashoka acquire the throne?

- Ans
- ☐ 1. Susima
 - ☐ 2. Bhadrayudha
 - ☐ 3. Samudra
 - ☒ 4. Radhagupta

Question ID : 630680552810
Option 1 ID : 6306802161334
Option 2 ID : 6306802161335
Option 3 ID : 6306802161337
Option 4 ID : 6306802161336
Status : Answered
Chosen Option : 2

Q.11 Consider the following statements:

1. The Prime Minister of India must be a member of the Lok Sabha or the Rajya Sabha.
 2. The President of India has the power to grant pardons, reprieves, respites, or remissions of punishment under Article 73 of the Indian Constitution.
 3. The Vice-President of India is ex officio Chairman of the Lok Sabha.
 4. The Governor of a state in India is appointed by the President and holds office during the pleasure of the President.
- Which of the statements above is/are correct?

- Ans
- ☐ 1. 2 only
 - ☒ 2. 1 and 4 only
 - ☐ 3. 1 only
 - ☐ 4. 3 and 4 only

Question ID : 630680552837
Option 1 ID : 6306802161443
Option 2 ID : 6306802161444
Option 3 ID : 6306802161442
Option 4 ID : 6306802161445
Status : Answered
Chosen Option : 2

Q.12 Consider the following statements:

1. The Brahmaputra river is known as Tsangpo in its upper reaches in Tibet.
 2. The Godavari river is often referred to as the Ganges of the South.
 3. The Krishna river has the second-largest river basin in India, after the Ganges.
 4. The Indus river originates from the Tibetan plateau, near Lake Mansarovar.
- Which of the statements above is/are correct?

- Ans
- ☐ 1. 1, 2, and 3 only
 - ☐ 2. 2, 3, and 4 only
 - ☐ 3. 1, 3, and 4 only
 - ☒ 4. 1, 2, and 4 only

Question ID : 630680552833
Option 1 ID : 6306802161429
Option 2 ID : 6306802161428
Option 3 ID : 6306802161427
Option 4 ID : 6306802161426
Status : Answered
Chosen Option : 4

Q.13 Consider the following statements:

1. The HDI assesses a country's average accomplishment in three aspects: a long and healthy life, knowledge, and a decent standard of living.
 2. Kerala has consistently topped among Indian states in HDI rankings.
 3. According to the Human Development Report of 2021-22, India ranks 135 out of 191 countries, behind Bangladesh (129) and Sri Lanka (73).
- Which of the statements above is/are correct?

- Ans
- ☒ 1. 2 and 3 only
 - ☒ 2. 1, 2 and 3
 - ☒ 3. 1 and 2 only
 - ☒ 4. 1 and 3 only

Question ID : 630680552835
Option 1 ID : 6306802161435
Option 2 ID : 6306802161437
Option 3 ID : 6306802161434
Option 4 ID : 6306802161436
Status : Answered
Chosen Option : 2

Q.14 The height of the Dancing Girl figurine of Indus Valley Civilization is about _____. Ans

- ☒ 1. 83 cm
- ☒ 2. 169 cm
- ☒ 3. 11 cm
- ☒ 4. 111 cm

Question ID : 630680552812
Option 1 ID : 6306802161343
Option 2 ID : 6306802161344
Option 3 ID : 6306802161342
Option 4 ID : 6306802161345
Status : Answered
Chosen Option : 3

Q.15 Consider the following statements:

1. The Eighth Schedule of the Indian Constitution lists 22 languages recognized as scheduled languages of India.
 2. Sanskrit is the liturgical language of Hinduism, Buddhism, and Jainism, and is one of the 22 languages listed in the Eighth Schedule.
 3. Konkani, spoken in the Western coastal regions of India, was added to the Eighth Schedule in the 71st amendment of the Constitution.
- Which of the statements above is/are correct?

- Ans
- ☒ 1. 1 and 2 only
 - ☒ 2. 1 only
 - ☒ 3. 2 and 3 only
 - ☒ 4. 1, 2, and 3

Question ID : 630680552831
Option 1 ID : 6306802161419
Option 2 ID : 6306802161418
Option 3 ID : 6306802161420
Option 4 ID : 6306802161421
Status : Answered
Chosen Option : 4

Q.16 Consider the following statements:

1. HDI is a composite index that accounts for life expectancy at birth, mean years of schooling, expected years of schooling, and Gross National Income per capita.
 2. As per the UNDP report, India's HDI value saw a decline during the COVID-19 pandemic.
 3. The HDI for India's female population has been historically lower than that for the male population.
 4. The Inequality-adjusted Human Development Index (IHDI) considers inequality in the distribution of each dimension across the population.
- Which of the statements above is/are correct?

- Ans
- ☒ 1. 1, 2, and 4 only
 - ☒ 2. 1, 2, 3 and 4
 - ☒ 3. 1, 3, and 4 only
 - ☒ 4. 2, 3, and 4 only

Question ID : 630680552836
Option 1 ID : 6306802161438
Option 2 ID : 6306802161441
Option 3 ID : 6306802161439
Option 4 ID : 6306802161440
Status : Answered
Chosen Option : 1

Q.17 Which of the following rivers are east flowing rivers?

- A) Godavari
- B) Tapi
- C) Krishna
- D) Narmada

- Ans
- ☒ 1. A, B, C only
 - ☒ 2. A, C only
 - ☒ 3. B, C, D only
 - ☒ 4. A, B only

Question ID : 630680552813
Option 1 ID : 6306802161346
Option 2 ID : 6306802161347
Option 3 ID : 6306802161348
Option 4 ID : 6306802161349
Status : Answered
Chosen Option : 2

Q.18 Net Indirect Taxes are included in _____.

- Ans
- ☒ 1. Personal Taxes
 - ☒ 2. Personal Disposable Income
 - ☒ 3. Net Current Transfers
 - ☒ 4. National Disposable Income

Question ID : 630680552815
Option 1 ID : 6306802161357
Option 2 ID : 6306802161356
Option 3 ID : 6306802161355
Option 4 ID : 6306802161354
Status : Answered
Chosen Option : 1

Q.19 Consider the following statements:

1. The Vijayanagara Empire was established by Harihara-I and Bukka Raya-I.
 2. Krishnadevaraya, the greatest ruler of the Vijayanagara Empire, belonged to the Tuluva dynasty.
 3. The Battle of Talikota led to the decline of the Chola Empire.
- Which of the statements above is/are correct?

Ans ☒ 1. 1 and 2 only

☐ 2. 1, 2, and 3

☐ 3. 2 and 3 only

☐ 4. 1 and 3 only

Question ID : 630680552830

Option 1 ID : 6306802161414

Option 2 ID : 6306802161417

Option 3 ID : 6306802161415

Option 4 ID : 6306802161416

Status : Answered

Chosen Option : 2

Q.20 Consider the following statements:

- 1) The Indian National Congress was formed in 1885 with A.O. Hume as its first president.
 - 2) The Muslim League was founded in 1906 and proposed the idea of separate electorates for Muslims with the Lucknow Pact.
 - 3) The All India Kisan Sabha was established in Lucknow in 1936 to address the issues of the peasantry.
 - 4) The Ghadar Party was an international political movement founded by Punjabi Indians in the United States and Canada with the aim of liberating India from British rule.
- Which of the above statements are correct?

Ans ☐ 1. 1, 3, and 4

☒ 2. 2, 3, and 4

☐ 3. 1, 2, and 4

☐ 4. 1, 2, and 3

Question ID : 630680552829

Option 1 ID : 6306802161412

Option 2 ID : 6306802161411

Option 3 ID : 6306802161410

Option 4 ID : 6306802161413

Status : Answered

Chosen Option : 3

Q.1 Janaki leaves her home every day at 7:55 a.m and reaches office at 9: 25 a.m. However, one day she left her home at 7:55 a.m. but reached office at 09:20:30 a.m.

Which of the statements below support the information provided above?

Statement 1: Janaki travelled $\frac{3}{10}$ of the distance at $\frac{6}{7}$ of her usual speed and the rest of the distance at $\frac{7}{6}$ of her usual speed.

Statement 2: Janaki travelled $\frac{5}{8}$ of the distance at $\frac{5}{4}$ of her usual speed and the rest of the distance at $\frac{5}{6}$ of her usual speed.

Statement 3: Janaki travelled $\frac{7}{9}$ of the distance at $\frac{5}{6}$ of her usual speed and the rest of the distance at $\frac{20}{3}$ of her usual speed.

Ans

 1.

Each of Statements 1 and 3 supports the information provided, but Statement 2 doesn't.

 2.

Each of Statements 2 and 3 supports the information provided, but Statement 1 doesn't.

 3.

Each of Statements 1 and 2 supports the information provided, but Statement 3 doesn't.

 4.

None of the three statements supports the information provided.

Question ID : 630680552796

Option 1 ID : 6306802161279

Option 2 ID : 6306802161280

Option 3 ID : 6306802161278

Option 4 ID : 6306802161281

Status : Not Answered

Chosen Option : --

Q.2 In the last financial year the ratio of the monthly incomes of Viraj and Rohan was m : n and the ratio of their monthly expenditures was p : n. In the current financial year Viraj's income has increased by q% and his expenditure has gone up by 2q%. The corresponding increases for Rohan have been r% and s% respectively. The current monthly savings of Viraj and Rohan are respectively Rs u and Rs v, while the monthly savings of Rohan last year was Rs t.

Which one of the following is correct in respect of the Question and the Statements given below?

Statement 1: The values of m, n, p, q, r, s, t, u, and v are given respectively as 8, 5, 4, 12.5, 40, 20, 10000, 58000, and 24000.

Statement 2: The values of m, n, p, q, r, s, t, u, and v are given respectively as 10, 7, 6, 15, 40, 20, 7700, 21530, and 14140.

Ans

 1.

Only statement 2 has values of the variables that are consistent with one another.

 2.

Only statement 1 has values of the variables that are consistent with one another.

 3.

Neither of the two statements has values of the variables that are consistent with one another.

 4.

Both statements have values of the variables that are consistent with one another.

Question ID : 630680552791

Option 1 ID : 6306802161259

Option 2 ID : 6306802161258

Option 3 ID : 6306802161261

Option 4 ID : 6306802161260

Status : Not Answered

Chosen Option : --

Q.3 A train travels at a speed of 72.6 km/hr. How many kilometres will it travel in 15 minutes?

- Ans
- ☐ 1. 13.12 km
 - ☐ 2. 16.22 km
 - ☐ 3. 20.5 km
 - ☒ 4. 18.15 km

Question ID : 630680552776
Option 1 ID : 6306802161199
Option 2 ID : 6306802161200
Option 3 ID : 6306802161201
Option 4 ID : 6306802161198
Status : Answered
Chosen Option : 4

Q.4 From a cask filled with wine, 108.75 litres are first drawn and replaced with water. From this mixture 87 litres are drawn and replaced with water. The ratio of wine to water in the cask is now 3 : 2. How many litres of wine did the cask initially hold?

- Ans
- ☐ 1. 522
 - ☐ 2. 348
 - ☐ 3. 470
 - ☒ 4. 435

Question ID : 630680552788
Option 1 ID : 6306802161246
Option 2 ID : 6306802161248
Option 3 ID : 6306802161249
Option 4 ID : 6306802161247
Status : Answered
Chosen Option : 3

Q.5 What would be the annual interest accrued on a deposit of ₹24,550 in a bank that pays a 22% per annum rate of simple interest?

- Ans
- ☐ 1. ₹6320
 - ☒ 2. ₹5401
 - ☐ 3. ₹5560
 - ☐ 4. ₹4760

Question ID : 630680552769
Option 1 ID : 6306802161171
Option 2 ID : 6306802161170
Option 3 ID : 6306802161172
Option 4 ID : 6306802161173
Status : Answered
Chosen Option : 2

Q.6 The cost price of 28 articles is the same as the selling price of x articles. If the profit is 40%, then find the value of x .

- Ans
- ☒ 1. 14
 - ☒ 2. 20
 - ☒ 3. 15
 - ☒ 4. 16

Question ID : 630680552774
Option 1 ID : 6306802161190
Option 2 ID : 6306802161193
Option 3 ID : 6306802161191
Option 4 ID : 6306802161192
Status : Answered
Chosen Option : 2

Q.7 How many pairs of natural numbers (x, y) exist such that $x > y$ and the product of x, y and $\text{HCF}(x, y) = 2520$?

- Ans
- ☒ 1. 3
 - ☒ 2. 4
 - ☒ 3. 5
 - ☒ 4. 6

Question ID : 630680552790
Option 1 ID : 6306802161256
Option 2 ID : 6306802161257
Option 3 ID : 6306802161255
Option 4 ID : 6306802161254
Status : Not Answered
Chosen Option : --

Q.8 The average age of a group of 10 friends is 27 years. If one friend leaves the group, the average becomes 25 years. Find the age of the friend who left the group.

- Ans
- ☒ 1. 45 years
 - ☒ 2. 50 years
 - ☒ 3. 55 years
 - ☒ 4. 65 years

Question ID : 630680552768
Option 1 ID : 6306802161167
Option 2 ID : 6306802161169
Option 3 ID : 6306802161168
Option 4 ID : 6306802161166
Status : Answered
Chosen Option : 1

Q.9 If the numerator of a fraction is increased by 25% and the denominator is decreased by 10%, the value of the new fraction becomes $\frac{25}{24}$. Find the original fraction.

- Ans
- ☒ 1. 2 : 3
 - ☒ 2. 4 : 3
 - ☒ 3. 3 : 2
 - ☒ 4. 3 : 4

Question ID : 630680552773
Option 1 ID : 6306802161186
Option 2 ID : 6306802161188
Option 3 ID : 6306802161189
Option 4 ID : 6306802161187
Status : Answered
Chosen Option : 4

Q.1 Find the HCF of 36, 108, and 156.

- 0
- ☒ 1. 12
- Ans
- ☒ 2. 36
 - ☒ 3. 16
 - ☒ 4. 9

Question ID : 630680552771
Option 1 ID : 6306802161178
Option 2 ID : 6306802161179
Option 3 ID : 6306802161181
Option 4 ID : 6306802161180
Status : Answered
Chosen Option : 1

Q.11 Which one of the following is correct in respect of the Statements given below?

Statement 1: 2^{10} is the smallest natural number having exactly 11 factors.

Statement 2: 2^{11} is the smallest natural number having exactly 12 factors.

Statement 3: 2^{12} is the smallest natural number having exactly 13 factors.

- Ans
- ☒ 1. All the three statements given above are true.
 - ☒ 2. Statements 1 and 2 are true, but Statement 3 is false.
 - ☒ 3. None of the three statements (1, 2, 3) given is true.
 - ☒ 4. Statements 1 and 3 are true, but Statement 2 is false.

Question ID : 630680552789
Option 1 ID : 6306802161250
Option 2 ID : 6306802161251
Option 3 ID : 6306802161253
Option 4 ID : 6306802161252
Status : Not Answered
Chosen Option : --

Q.12 If the interest is compounded half-yearly, calculate the amount when the principal is ₹4000, the rate of interest is 22% per annum and the duration is one year.

Ans

- ✓ 1. ₹4928.4
- ✗ 2. ₹4288.8
- ✗ 3. ₹4825.5
- ✗ 4. ₹5204.9

Question ID : 630680552770
Option 1 ID : 6306802161174
Option 2 ID : 6306802161175
Option 3 ID : 6306802161177
Option 4 ID : 6306802161176
Status : Answered
Chosen Option : 1

Q.13 Rohan purchased an item for which there was a 13.5% discount offered on the part of the payment made in cash and a 6.25% surcharge on the part of the payment made through a credit card. If Rohan would have paid the entire amount in cash he would have paid Rs y for the item. But he actually had to pay Rs 40964 in all for the item, out of which Rs 29064 was paid in cash. What is the value of y?

Ans

- ✗ 1. 32988
- ✗ 2. 35700
- ✗ 3. 38554
- ✓ 4. 38752

Question ID : 630680552792
Option 1 ID : 6306802161265
Option 2 ID : 6306802161263
Option 3 ID : 6306802161264
Option 4 ID : 6306802161262
Status : Not Answered
Chosen Option : --

Q.14 On a particular day each of Danny, Edwin and Fahim sold three types of pens from their respective shops. As a coincidence, each of them sold an identical number of pens of Type A, an identical number of pens of Type B and an identical number of pens of Type C. However, the numbers of pens of each type that were sold were all different from one another. Also, the three sellers sold each of the types of pens at different prices per unit.

Assertion (A): It is possible that Danny sold each pen of Type A at a profit of Rs 2, each pen of Type B at a loss of Re 1, and each pen of Type C at a loss of Rs 12 and made an overall profit of Rs 8; Edwin sold each pen of Type A at a profit of Rs 2, each pen of Type B at a loss of Rs 6, and each pen of Type C at a loss of Rs 6 and made an overall profit of Rs 14; and Fahim sold each pen of Type A at a profit of Re 1, each pen of Type B at a profit of Re 1, and each pen of Type C at a loss of Rs 3 and made an overall profit of Rs 27.

Reason (R): Framing and solving the three possible linear equations we will find that we get a unique solution.

Ans

- ✗ 1. Assertion (A) is true and Reason (R) is false.
- ✗ 2. Both Assertion (A) and Reason (R) are true but Reason (R) is not a correct explanation of Assertion (A).
- ✗ 3. Both Assertion (A) and Reason (R) are true and Reason (R) is a correct explanation of Assertion (A).
- ✓ 4. Assertion (A) is false and Reason (R) is true.

Question ID : 630680552797
Option 1 ID : 6306802161284
Option 2 ID : 6306802161283
Option 3 ID : 6306802161282
Option 4 ID : 6306802161285
Status : Not Answered
Chosen Option : --

Q.15 A shop sells only steamed momos and fried momos. On a particular day the ratio of the numbers of steamed momos and fried momos sold from that shop was 5 : 4. How many steamed momos were sold from the shop on that day?

Which one of the following is correct in respect of the Question and the Statements given below?

Statement 1: If the number of steamed momos were to double, the ratio of the numbers of steamed momos and fried momos sold from that shop would become 5 : 2.

Statement 2: If the number of fried momos sold was at least 13 more while the number of steamed momos sold stayed the same, then the number of fried momos sold would have been more than the number of steamed momos sold.

Ans ☒ 1.

The data in Statement 2 alone are sufficient answer the question.

☒ 2.

The data in Statement 1 and Statement 2 both taken together are not sufficient to answer the question.

☒ 3.

The data either in Statement 1 alone or in Statement 2 alone are sufficient to answer the question.

☒ 4.

The data in Statement 1 alone are sufficient to answer the question.

Question ID : 630680552794

Option 1 ID : 6306802161271

Option 2 ID : 6306802161273

Option 3 ID : 6306802161272

Option 4 ID : 6306802161270

Status : Not Answered

Chosen Option : --

Q.1 X's income is 44% more than that of Y. What percent is Y's income less than X's?

6 ☒ 1. 32.5%

Ans ☒ 2. 33%

☒ 3. 30.5%

☒ 4. 20.4%

Question ID : 630680552772

Option 1 ID : 6306802161183

Option 2 ID : 6306802161185

Option 3 ID : 6306802161182

Option 4 ID : 6306802161184

Status : Answered

Chosen Option : 3

Q.1 If $a^3 - b^3 = 602$ and $a - b = 2$, then find the value of $(a^2 + b^2)$.

7 ☒ 1. 202

Ans ☒ 2. 156

☒ 3. 260

☒ 4. 240

Question ID : 630680552777

Option 1 ID : 6306802161203

Option 2 ID : 6306802161202

Option 3 ID : 6306802161204

Option 4 ID : 6306802161205

Status : Answered

Chosen Option : 1

Q.18 The team of A, B, and C was supposed to complete a piece of work. Working alone, A could have completed the same work in 190 hours, B could have completed the same work in 285 hours, while C could have completed it in 342 hours. The trio decided that only one of the three would work at any point of time. In the first cycle of three days A worked for two hours on Day 1, B worked for two hours on Day 2, and C worked for two hours on Day 3. In the second cycle of three days A worked for four hours on Day 1, B worked for four hours on Day 2, and C worked for four hours on Day 3. In the third cycle of three days A worked for six hours on Day 1, B worked for six hours on Day 2, and C worked for six hours on Day 3. This continued till the piece of work was completed, with each working for $2n$ hours in Cycle n , the sole exception being made, if necessary, in the last cycle, as the work may get completed mid-cycle. What was the total number of days needed for the work to be completed?

- Ans
- ☒ 1. 26
 - ☐ 2. 25.5
 - ☐ 3. 26.4
 - ☐ 4. 25.8

Question ID : 630680552795
 Option 1 ID : 6306802161276
 Option 2 ID : 6306802161274
 Option 3 ID : 6306802161277
 Option 4 ID : 6306802161275
 Status : Not Answered
 Chosen Option : --

Q.19 Three natural numbers are such that one-third of the first number is equal to two-fifths of the second, and two-thirds of the second number is equal to one-seventh of the third. The sum of five times the third number and half of the square of the first number is 1348. What is the value of the second number?

- Ans
- ☐ 1. 24
 - ☒ 2. 30
 - ☐ 3. 15
 - ☐ 4. 21

Question ID : 630680552793
 Option 1 ID : 6306802161269
 Option 2 ID : 6306802161267
 Option 3 ID : 6306802161266
 Option 4 ID : 6306802161268
 Status : Answered
 Chosen Option : 2

Q.2 If 22% of x is equal to 66% of y , then find the value of $x : y$.

- 0
- ☐ 1. 1 : 3
 - Ans ☐ 2. 11 : 6
 - ☒ 3. 3 : 1
 - ☐ 4. 2 : 5

Question ID : 630680552775
 Option 1 ID : 6306802161195
 Option 2 ID : 6306802161197
 Option 3 ID : 6306802161194
 Option 4 ID : 6306802161196
 Status : Answered
 Chosen Option : 3

Q.1 In a class Pratik ranks 22nd from top and 27th from bottom, how many students are there in that class?

- Ans
- ✓ 1. 48
 - ✗ 2. 30
 - ✗ 3. 37
 - ✗ 4. 44

Question ID : 630680552727
Option 1 ID : 6306802161003
Option 2 ID : 6306802161005
Option 3 ID : 6306802161002
Option 4 ID : 6306802161004
Status : Answered
Chosen Option : 1

Q.2 Select the correct mirror image of the given figure when the mirror is placed at MN as shown below.



- Ans
- ✗ 1. 4 2 m d 5 Y p
 - ✓ 2. 4 2 m q 2 Y p
 - ✗ 3. 4 2 m q 2 7 6
 - ✗ 4. 7 S m q 2 Y p

Question ID : 630680552755
Option 1 ID : 630680216111
Option 2 ID : 6
Option 3 ID : 630680216111
Option 4 ID : 7
Status : 630680216111
Chosen Option : 4
630680216111

5 Answered
2

Q.3 Four words have been given, out of which three are alike in some manner and one is different. Select the odd word.

- Ans
- ✗ 1. Yen
 - ✗ 2. Euros
 - ✓ 3. Beijing
 - ✗ 4. Yuan

Question ID : 630680552731
Option 1 ID : 6306802161019
Option 2 ID : 6306802161018
Option 3 ID : 6306802161021
Option 4 ID : 6306802161020
Status : Answered
Chosen Option : 3

Q.4 Select the wrong term in the following number series:

458, 230, 116, 60, 30.5

Ans ☒ 1. 60

☐ 2. 30.5

☐ 3. 230

☐ 4. 116

Question ID : 630680552735

Option 1 ID : 6306802161035

Option 2 ID : 6306802161034

Option 3 ID : 6306802161036

Option 4 ID : 6306802161037

Status : Answered

Chosen Option : 1

Q.5 Six girls named A, B, C, D, E and F are sitting in a straight line, all facing north. Each one of them has different profession from amongst lawyer, doctor, chef, clerk, teacher and engineer. B is second to the left of D. C is third to the right of D. Only doctor is sitting between clerk and chef. Engineer is second to the left of lawyer. Clerk is sitting at one of the extreme ends. F is a teacher. C is a lawyer. E is not the immediate neighbour of F.

Which of the following is/are true based on the given arrangement?

I. E is an engineer.

II. The doctor is sitting at third place to the left of teacher.

III. Engineer is sitting to the immediate right of chef.

Ans ☐ 1. Only I and II are true

☒ 2. Only II and III are true

☐ 3. All I, II and III are true

☐ 4. Only I and III are true

Question ID : 630680552747

Option 1 ID : 6306802161083

Option 2 ID : 6306802161084

Option 3 ID : 6306802161085

Option 4 ID : 6306802161082

Status : Not Answered

Chosen Option : --

Q.6 In a university, 88 students had taken Mathematics courses, 90 students had taken Hindi courses, 64 students had taken Biology courses, 22 students had taken Mathematics and Biology, 28 students had taken Mathematics and Hindi, 24 students had taken Hindi and Biology courses, and 10 students had taken all three courses. Find how many students had taken mathematics courses only.

Ans ☐ 1. 44

☒ 2. 48

☐ 3. 50

☐ 4. 52

Question ID : 630680552730

Option 1 ID : 6306802161016

Option 2 ID : 6306802161017

Option 3 ID : 6306802161014

Option 4 ID : 6306802161015

Status : Answered

Chosen Option : 3

Q.7 Three Statements are given followed by two conclusions numbered I and II. Assuming the statements to be true, decide which of the conclusions logically follow(s) from the statements.

Statement I: Some Good are Bad.

Statement II: Some Good are Nice.

Statement III: Some Bad are Cute.

Conclusion I: Some Bad are not Cute.

Conclusion II: Some Nice are good.

- Ans
- ☒ 1. Only conclusion I follows
 - ☒ 2. Neither conclusion I nor II follows
 - ☒ 3. Both conclusions I and II follow
 - ☒ 4. Only conclusion II follows

Question ID : 630680552729

Option 1 ID : 6306802161010

Option 2 ID : 6306802161013

Option 3 ID : 6306802161012

Option 4 ID : 6306802161011

Status : Answered

Chosen Option : 4

Q.8 Three different positions of the same dice are given below. Find the number opposite of 37.



- Ans
- ☒ 1. 35
 - ☒ 2. 33
 - ☒ 3. 39
 - ☒ 4. 22

Question ID : 630680552734

Option 1 ID : 6306802161031

Option 2 ID : 6306802161030

Option 3 ID : 6306802161032

Option 4 ID : 6306802161033

Status : Answered

Chosen Option : 2

Q.9 Select the set in which the numbers are related in the same way as are the numbers of the following sets.

(NOTE : Operations should be performed on the whole numbers, without breaking down the numbers into its constituent digits. E.g. 13 – Operations on 13 such as adding /subtracting /multiplying etc. to 13 can be performed. Breaking down 13 into 1 and 3 and then performing mathematical operations on 1 and 3 is not allowed)
(24, 12, 169)
(66, 14, 263)

Ans

☒ 1. (25, 11, 127)

☒ 2. (47, 15, 273)

☒ 3. (61, 13, 211)

☒ 4. (21, 17, 210)

Question ID : 630680552756

Option 1 ID : 6306802161118

Option 2 ID : 6306802161119

Option 3 ID : 6306802161121

Option 4 ID : 6306802161120

Status : Not Answered

Chosen Option : --

Q.10 Read the following information carefully and answer the question that follows. You must assume everything in the statement to be true and decide which of the conclusion/s logically follow/s.

Infant jaundice is yellow discoloration of newborn baby's skin and eyes which occurs because the baby's blood contains an excess of a yellow pigment called bilirubin.

Infant jaundice usually occurs because a baby's liver isn't mature enough to get rid of bilirubin in the bloodstream.

Which of the following can be concluded from the given information?

A. In some newborn babies suffering from jaundice, the liver is not fully developed which causes excess bilirubin in the blood.

B. The function of liver is also to remove excess bilirubin from the blood.

C. Excess bilirubin is undesirable for infants only. For adults, bilirubin is necessary for survival.

D. The colour of an infant's skin and eyes is usually yellowish in colour.

Ans

☒ 1. Only A and D

☒ 2. Only B, C and D

☒ 3. Only B

☒ 4. Only A, B and C

Question ID : 630680552753

Option 1 ID : 6306802161109

Option 2 ID : 6306802161108

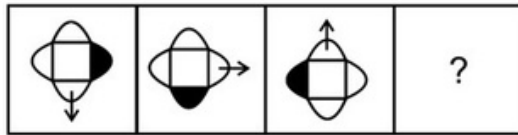
Option 3 ID : 6306802161107

Option 4 ID : 6306802161106

Status : Not Answered

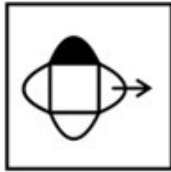
Chosen Option : --

Q.11 Select the figure that will replace the question mark (?) in the following figure series.

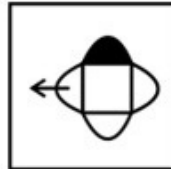


Ans

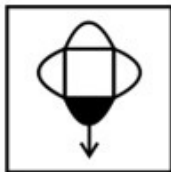
✗ 1.



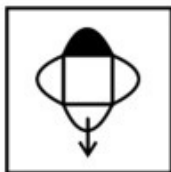
✓ 2.



✗ 3.



✗ 4.



Question ID : 630680552733

Option 1 ID : 6306802161027

Option 2 ID : 6306802161028

Option 3 ID : 6306802161029

Option 4 ID : 6306802161026

Status : Answered

Chosen Option : 2

Q.12 If A denotes 'addition', B denotes 'multiplication', C denotes 'subtraction', and D denotes 'division', then what will be the value of the following equation?

15 A 10 B 24 D 12 C 5 = ?

Ans

✗ 1. 5

✗ 2. 6

✗ 3. 10

✓ 4. 30

Question ID : 630680552736

Option 1 ID : 6306802161040

Option 2 ID : 6306802161041

Option 3 ID : 6306802161038

Option 4 ID : 6306802161039

Status : Answered

Chosen Option : 4

Q.13 Select the incorrect term in the alpha-numeric series:

X, Z, B, D, F, G

- Ans
- ☐ 1. X
 - ☐ 2. D
 - ☐ 3. Z
 - ☒ 4. G

Question ID : 630680552732
Option 1 ID : 6306802161025
Option 2 ID : 6306802161022
Option 3 ID : 6306802161024
Option 4 ID : 6306802161023
Status : Answered
Chosen Option : 4

Q.14 'A + B' means 'A is the sister of B'
'A = B' means 'A is the daughter of B'
'A # B' means 'A is the son of B'
'A & B' means 'A is the father of B'

Based on the above information, find out which of the given statements can be the reason/s behind the assertion made below if it is given that 'H & N + Y = K = C'.

Assertion: H is U's sister's husband?

Reason A : D & U

Reason B : U # C

- Ans
- ☐ 1. Only A is the reason behind the assertion
 - ☒ 2. Only B is the reason behind the assertion
 - ☐ 3. Both A and B are reasons behind the assertion
 - ☐ 4. Neither A nor B is the reason behind the assertion

Question ID : 630680552750
Option 1 ID : 6306802161095
Option 2 ID : 6306802161096
Option 3 ID : 6306802161094
Option 4 ID : 6306802161097
Status : Not Answered
Chosen Option : --

Q.15 In a certain code language, 'PLOT' is written as '63', and 'SOUP' is written as '71'. Which of the following are correct matches as per the given code language?




WORD	CODE
(i) LIKE	(W) 56
(ii) DOSE	(X) 37
(iii) MINT	(Y) 53

- Ans
- ☐ 1. i-Y, ii-W only
 - ☒ 2. i-X, iii-W only
 - ☐ 3. i-X, ii-Y, iii-W only
 - ☐ 4. i-X, ii-W only

Question ID : 630680552749
Option 1 ID : 6306802161092
Option 2 ID : 6306802161091
Option 3 ID : 6306802161093
Option 4 ID : 6306802161090
Status : Answered
Chosen Option : 2

Q.16 Arrange the words in a meaningful logical order and select the appropriate sequence :

1. Dhanbad
2. India
3. World
4. Jharkhand
5. Universe





Ans  1. 42153
 2. 14253
 3. 53421
 4. 14235

Question ID : 630680552728
Option 1 ID : 6306802161007
Option 2 ID : 6306802161006
Option 3 ID : 6306802161009
Option 4 ID : 6306802161008
Status : Answered
Chosen Option : 4

Q.17 In a class, six students named P, Q, R, S, T and U obtain different marks out of total 100 marks. The ratio between marks of T and S is 2: 3 respectively. P obtains 50% marks. R obtains 5 marks less than P. U obtains 1.5 times of the marks obtained by P. T obtains less marks U but more marks than R. Q obtains 20 marks more than T. The ratio between marks of T and U is 4: 5 respectively.

Which of the following is true based on the given information?

- I. S obtains 90% marks which are the highest among all.
II. The ratio between marks of P and Q is 5: 8 respectively.

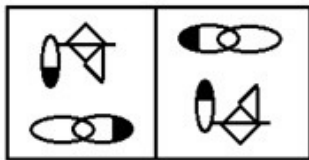
Ans  1. Only II
 2. Only I
 3. Neither I nor
 II 4. Both I and
II

Question ID : 630680552748
Option 1 ID : 6306802161087
Option 2 ID : 6306802161086
Option 3 ID : 6306802161089
Option 4 ID : 6306802161088
Status : Not Answered
Chosen Option : --

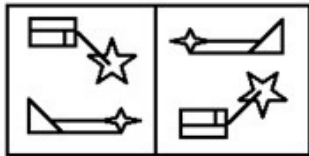
Q.18 Three of the following four figure pairs are alike in a certain way and thus form a group. Which is the one that does not belong to that group?

Ans

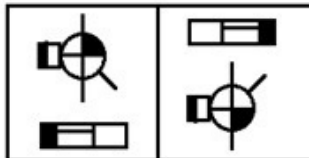
✗ 1.



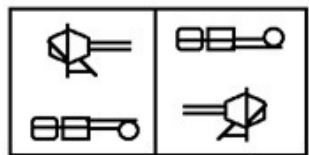
✗ 2.



✗ 3.



✓ 4.



Question ID : 630680552754

Option 1 ID : 630680216111

Option 2 ID : 2

Option 3 ID : 630680216111

Option 4 ID : 1

Status : 630680216111

Chosen Option : 0

630680216111

3 Answered

4

Q.19 NAPTURE is related to RCPGGPW in a certain way based on certain logic. In the same way, CURTAIN is related to TWEGPKC. Which of the following are correct matches following the same logic?

i. LOGICAL	(W) WQOMFGV
ii. MOUNTED	(X) KRPMPDG
iii. FIXTURE	(Y) TGDTCMP
iv. CERTAIN	(Z) ZKHGGTW

Ans ✗ 1. ii-W, iii-Z, iv-X only

✓ 2. ii-W, iii-Z only

✗ 3. ii-Z, iv-Y only

✗ 4. iii-Z only

Question ID : 630680552751

Option 1 ID : 6306802161101

Option 2 ID : 6306802161100

Option 3 ID : 6306802161099

Option 4 ID : 6306802161098

Status : Answered

Chosen Option : 2

Q.20A question is followed by two statements numbered (I) and (II). You have to decide whether the data provided in the statements are sufficient/necessary to answer the question. Read both the statements and decide the appropriate answer.

Question: If Kartik is the brother of Preeti, how is Kartik related to Amrita?

(I) Amrita is the daughter of Raghav, who is the son of Preeti's mother Seema.

(II) Seema is the wife of Prashant who is the paternal grandfather of Amrita.

- Ans
- ☒ 1. Data in Statement II alone is sufficient to answer the question while data in statement I is not
 - ☒ 2. Data in Statement I alone is sufficient to answer the question while data in statement II is not
 - ☒ 3. Data in statements I and II together are necessary to answer the question.
 - ☒ 4. Data in statements I and II together are NOT sufficient to answer the question

Question ID : 630680552752
Option 1 ID : 6306802161103
Option 2 ID : 6306802161102
Option 3 ID : 6306802161104
Option 4 ID : 6306802161105
Status : Answered
Chosen Option : 2

Section : English

Q.1 The sentence below has been divided into three parts. Select the part of the sentence that has an error. If the sentence has no error, select the option 'No Error'.

I don't know the reason why he/ has said all this yet it/ puts him in a bad light.

- Ans
- ☒ 1. has said all this yet it
 - ☒ 2. No error
 - ☒ 3. puts him in a bad light.
 - ☒ 4. I don't know the reason why he

Question ID : 630680552569
Option 1 ID : 6306802160371
Option 2 ID : 6306802160373
Option 3 ID : 6306802160372
Option 4 ID : 6306802160370
Status : Answered
Chosen Option : 4

Q.2 Arrange the given sentences (1-6) in the correct order to form a coherent paragraph.

1. They had escaped the dark world and were enveloped in a dazzling white light which almost blinded them.
2. The fountain of immortality sprung before them from which they collected the elixir in a large conch shell.
3. The next moment, the boys found themselves floating over misty clouds.
4. They gave him some elixir from the shell and he immediately acquired an ethereal form.
5. It was then that they saw the Formless One before them.
6. There was bliss and tranquillity around them.

- Ans
- ☒ 1. 614523
 - ☒ 2. 316254
 - ☒ 3. 352146
 - ☒ 4. 512346

Question ID : 630680552584
Option 1 ID : 6306802160430
Option 2 ID : 6306802160431
Option 3 ID : 6306802160432
Option 4 ID : 6306802160433
Status : Answered
Chosen Option : 2

Q.3 Which of the following statements correctly use the idiom 'pour oil on troubled waters' by substituting the underlined words?

- A. If you unnecessarily interfere in others' affairs, you will suffer yourselves.
B. Fed up with frequent strikes, the management decided to, deal with the situation decisively.
C. The government ordered a judicial enquiry into the communal riots in a bid to pacify the situation.
D. From his behaviour it is obvious that someone has prejudiced him against me.

Ans ☒ 1. Only statement B correctly uses the idiom.
☒ 2. Only statement C correctly uses the idiom.
☒ 3. Both statements A and C correctly use the idiom.
☒ 4. Both statements B and D correctly use the idiom.

Question ID : 630680552591
Option 1 ID : 6306802160460
Option 2 ID : 6306802160461
Option 3 ID : 6306802160458
Option 4 ID : 6306802160459
Status : Answered
Chosen Option : 2

Q.4 Match the following groups of words with the correct one-word substitutions.

phrase	one-word substitution
A. an annual calendar that contains important dates and time	1. connoisseur
B. one who is a critical judge of any art	2. almanac
C. one who does not appreciate art, literature or music	3. utopia
D. an ideally perfect state	4. philistine

Ans ☒ 1. A-2,B-1,C-4,D-3
☒ 2. A-3,B-4,C-1,D-2
☒ 3. A-2,B-4,C-1,D-3
☒ 4. A-4,B-2,C-3,D-1

Question ID : 630680552585
Option 1 ID : 6306802160437
Option 2 ID : 6306802160434
Option 3 ID : 6306802160435
Option 4 ID : 6306802160436
Status : Answered
Chosen Option : 1

Q.5 Select the most appropriate meaning of the given proverb from the options

Better late than never

Ans ☒ 1. It's good to be clean. God is clean, and you should be too
☒ 2. It's better to finish something late than to never do it at all
☒ 3. People who are similar spend time together
☒ 4. Don't make someone angry or hurt someone who is helping you or paying for you

Question ID : 630680552564
Option 1 ID : 6306802160352
Option 2 ID : 6306802160350
Option 3 ID : 6306802160351
Option 4 ID : 6306802160353
Status : Answered
Chosen Option : 2

Q.6 Four sentences are given below. Find the odd sentence out.

A. A new analysis has determined that the threat of global warming can still be greatly diminished if nations cut emissions of heat-trapping greenhouse gases by 70% this century.

B. With research showing that additional warming of about 1 degree C may be the threshold for dangerous climate change, the European Union has called for dramatic cuts in emissions of carbon dioxide and other greenhouse gases.

C. The most dangerous potential aspects of climate change include massive losses of Arctic sea ice and permafrost.

D. "This research indicates that we can no longer avoid significant warming during this century," said NCAR scientist Warren Washington, the study paper's lead author.

- Ans
- ☒ 1. Sentence A
 - ☒ 2. Sentence B
 - ☒ 3. Sentence C
 - ☒ 4. Sentence D

Question ID : 630680552583
Option 1 ID : 6306802160426
Option 2 ID : 6306802160427
Option 3 ID : 6306802160428
Option 4 ID : 6306802160429
Status : Answered
Chosen Option : 2

Q.7 Select the word that is opposite in meaning (ANTONYM) to the word given below.

Corpulent

- Ans
- ☒ 1. Aerial
 - ☒ 2. Slim
 - ☒ 3.
 - ☒ Anecdotalist
 - 4. Narrator

Question ID : 630680552565
Option 1 ID : 6306802160355
Option 2 ID : 6306802160354
Option 3 ID : 6306802160357
Option 4 ID : 6306802160356
Status : Answered
Chosen Option : 2

Q.8 The sentence below has been divided into three parts. Select the part of the sentence that has an error. If the sentence has no error, select the option 'No Error'.

He has been read through/ the archives to research/ his article on the town's history.

- Ans
- ☒ 1. No error
 - ☒ 2. his article on the town's
 - ☒ history. 3. the archives to
 - ☒ research
 - 4. He has been read through

Question ID : 630680552571
Option 1 ID : 6306802160381
Option 2 ID : 6306802160380
Option 3 ID : 6306802160379
Option 4 ID : 6306802160378
Status : Answered
Chosen Option : 4

Q.9 Match the following groups of words with the correct one-word substitutions.

phrase	one-word substitution
A. the act of looking into one's mind	1. hallucination
B. pleasure mixed with sadness at recalling happy moments in the past	2. reverie
C. a false perception of things that do not really exist	3. introspection
D. a state of absent-minded daydreaming	4. nostalgia

- Ans
- ☒ 1. A-4,B-2,C-3,D-1
 - ☒ 2. A-2,B-1,C-4,D-3
 - ☒ 3. A-3,B-4,C-1,D-2
 - ☒ 4. A-3,B-2,C-4,D-1

Question ID : 630680552586
Option 1 ID : 6306802160440
Option 2 ID : 6306802160438
Option 3 ID : 6306802160439
Option 4 ID : 6306802160441
Status : Answered
Chosen Option : 4

Q.10 Select the correct conclusion based on the meaning of the underlined word:

Statement: The trade embargo has impacted export revenue.

Conclusion:

i. The new trade laws have exempted goods from duty.

ii. Trading in certain goods has been temporarily stopped.

iii. The government order has put restrictions on trade with some countries.

iv. Exports have increased after signing of new trade treaties.

- Ans
- ☒ 1. options i and ii are correct
 - ☒ 2. options i, ii and iv are correct
 - ☒ 3. options ii and iii are correct
 - ☒ 4. option i and iv are correct

Question ID : 630680552588
Option 1 ID : 6306802160447
Option 2 ID : 6306802160449
Option 3 ID : 6306802160448
Option 4 ID : 6306802160446
Status : Answered
Chosen Option : 3

Q.11 The sentence below has been divided into three parts. Select the part of the sentence that has an error. If the sentence has no error, select the option 'No Error'.

As noon approached, sunlight filtered/ through an branches, casting dappled/ patterns on the cobblestone path.

- Ans
- ☒ 1. patterns on the cobblestone path.
 - ☒ 2. As noon approached, sunlight filtered
 - ☒ 3. No error
 - ☒ 4. through an branches, casting dappled

Question ID : 630680552568
Option 1 ID : 6306802160368
Option 2 ID : 6306802160366
Option 3 ID : 6306802160369
Option 4 ID : 6306802160367
Status : Answered
Chosen Option : 4

Q.12 Select the correct conclusion based on the meaning of the underlined word:

Statement: After his father's death, he became a prodigal of his fortune.

Conclusion:

- i. He gained wisdom and spent money cautiously.
- ii. Being the only heir, he inherited all his father's wealth.
- iii. He squandered his wealth recklessly and lost all he had.
- iv. He assumed the responsibility of increasing his father's fortune.

- Ans
- ☒ 1. Both options ii and iii are correct
 - ☒ 2. only option iv is correct
 - ☒ 3. only option iii is correct
 - ☒ 4. Both options ii and iv are correct

Question ID : 630680552587
Option 1 ID : 6306802160443
Option 2 ID : 6306802160444
Option 3 ID : 6306802160445
Option 4 ID : 6306802160442
Status : Answered
Chosen Option : 3

Q.13 Select the word that is closest in meaning (SYNONYM) to the word given below

Equivocal

- Ans
- ☒ 1. Unanimous
 - ☒ 2. Occlude
 - ☒ 3. Obstruct
 - ☒ 4. Ambiguous

Question ID : 630680552566
Option 1 ID : 6306802160359
Option 2 ID : 6306802160358
Option 3 ID : 6306802160360
Option 4 ID : 6306802160361
Status : Answered
Chosen Option : 1

Q.14 Some parts of a sentence have been jumbled up, and labelled P, Q, R and S. Select the option that gives the correct sequence in which these parts can be rearranged to form a meaningful and grammatically correct paragraph. Opening and Closing sentence indicate the start of the paragraph and end of the sentence paragraph.

Opening Sentence: Born on October 5, 1983, in Los Angeles, California, Emma Stone's journey in the entertainment industry began at a young age.

P. While attending local theatre classes, Stone discovered her passion for acting and soon started auditioning for various roles.

Q. Despite facing initial rejections, Stone's determination and talent eventually landed her a breakthrough role in the comedy "Superbad."

R. Stone's career skyrocketed as she garnered critical acclaim for her performances in movies like "The Help" and "La La Land," earning her an Academy Award for Best Actress.

S. Inspired by the likes of Meryl Streep, Stone continued honing her craft and exploring diverse roles, solidifying her status as one of Hollywood's leading actresses.

Closing Sentence: Today, Emma Stone stands as a respected figure in the film industry, celebrated for her versatility and contributions to the world of cinema.

Ans

☒ 1. SRQP

☒ 2. SPQR

☒ 3. PQSR

☒ 4. RQPS

Question ID : 630680552562

Option 1 ID : 6306802160342

Option 2 ID : 6306802160345

Option 3 ID : 6306802160343

Option 4 ID : 6306802160344

Status : Answered

Chosen Option : 3

Q.15 The sentence below has been divided into three parts. Select the part of the sentence that has an error. If the sentence has no error, select the option 'No Error'.

We will have to spend a few/ hours journeying down in a bus,/ which is bound to take its toll.

Ans

☒ 1. hours journeying down in a bus,

☒ 2. which is bound to take its toll.

☒ 3. We will have to spend a few

☒ 4. No error

Question ID : 630680552570

Option 1 ID : 6306802160375

Option 2 ID : 6306802160376

Option 3 ID : 6306802160374

Option 4 ID : 6306802160377

Status : Answered

Chosen Option : 1

Q.16 In the following passage there are blanks, each of which has been numbered. Select the correct option to fill in the blanks.

What draws India closer to an obscure and indifferent picture are the 1. _____ tribes. They own their personal identity, far from the 2. _____ trend and economic development, as Adivasis having their own language, religion, festivals, cuisine, dance and music. With such an 3. _____ culture and hospitality they also significantly hold a contrasting patriarchal and matriarchal society. The lively 4. _____ of the tribal community in India stretches from the remote villages tucked in the Indian Himalayan region to southern-most tip of India and from the farthest corner of North East India to the dunes of Rajasthan.

Ans

- ✓ 1. indigenous, 2- contemporary, 3- enigmatic, 4- tableau
- ✗ 2. 1- original, 2- unique, 3- oppressive, 4- representation
- ✗ 3. 1- obsolete, 2- modern, 3- enchanting, 4- presence
- ✗ 4. 1- immigrant, 2- current, 3- alarming, 4- culture

Question ID : 630680552589

Option 1 ID : 6306802160451

Option 2 ID : 6306802160453

Option 3 ID : 6306802160450

Option 4 ID : 6306802160452

Status : Answered

Chosen Option : 1

Q.17 Select the word that is closest in meaning (SYNONYM) to the word given below

Aegis

Ans

- ✗ 1. Aggravate
- ✗ 2. Spread
- ✗ 3. Intensify
- ✓ 4. Protection

Question ID : 630680552567

Option 1 ID : 6306802160365

Option 2 ID : 6306802160362

Option 3 ID : 6306802160364

Option 4 ID : 6306802160363

Status : Answered

Chosen Option : 1

Q.18 Select the correct conclusion based on the meaning of the underlined idiom:

Statement: Splitting hairs is futile and will not resolve our problem.

Conclusion:

- i. A superficial investigation will suffice for the problem at hand.
- ii. Making peevish criticisms on trivial matters will not lead us anywhere.
- iii. A difference of opinion is not tolerated in a dictatorship.

Ans

- ✗ 1. Only conclusion (i) is correct
- ✗ 2. Both conclusion (ii) and (iii) are correct
- ✓ 3. Only conclusion (ii) is correct
- ✗ 4. Both conclusion (i) and (iii) are correct

Question ID : 630680552590

Option 1 ID : 6306802160454

Option 2 ID : 6306802160455

Option 3 ID : 6306802160456

Option 4 ID : 6306802160457

Status : Answered

Chosen Option : 1

Q.19 Select the most appropriate meaning of the given idiom

Go down like a lead balloon

Ans ☒ 1. To be received badly by an audience

☐ 2. To surrender

☐ 3. To gamble everything you have

☐ 4. Put yourself in a tough position in order to support someone/ something

Question ID : 630680552563

Option 1 ID : 6306802160346

Option 2 ID : 6306802160349

Option 3 ID : 6306802160347

Option 4 ID : 6306802160348

Status : Answered

Chosen Option : 1

Q.20 There is a sentence that is missing in the paragraph below. Look at the paragraph and decide in which blank (1, 2, 3, or 4) the following sentence would best fit.

Sentence: On the other hand, we find persons engaged in worst types of corrupt practices living in peace and prosperity.

We often come across situations and incidents, which appear quite contradictory to

the known laws of Nature, creating doubts about the impartiality of divine justice.

___1___ For instance, honest, duty-conscious, morally elevated person is often seen caught in adversities in one form or the other, or is suddenly struck with a great misfortune in life as though he/she were being punished by God for a great

sin. ___2___. An idler wins a jackpot or inherits a fortune from unexpected

quarters, whereas a hard working intelligent person is found suffering endlessly for

want of basic necessities. ___3___. One person achieves great success with little effort, whereas another does not succeed in spite of his best efforts. ___4___.

Such phenomena are popularly ascribed to the role of fate.

Ans

☐ 1. blank 4

☐ 2. blank 1

☒ 3. blank 2

☐ 4. blank 3

Question ID : 630680552582

Option 1 ID : 6306802160425

Option 2 ID : 6306802160422

Option 3 ID : 6306802160423

Option 4 ID : 6306802160424

Status : Not Answered

Chosen Option : --